

3.1 Geometry Toolkit

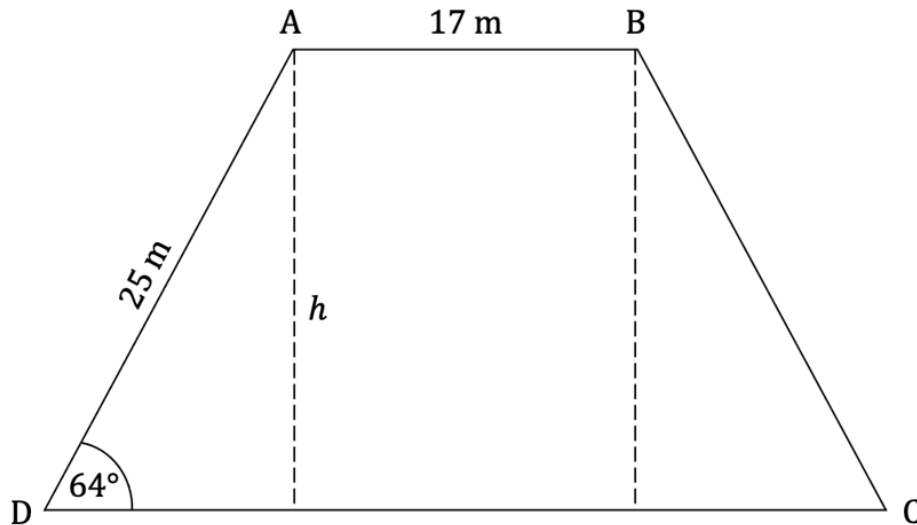
Question Paper

Course	DPIB Maths
Section	3. Geometry & Trigonometry
Topic	3.1 Geometry Toolkit
Difficulty	Medium

Time allowed: 100
Score: /83
Percentage: /100

Question 1a

ABCD is an isosceles trapezoid where $AB = 17\text{ m}$ and $AD = BC = 25\text{ m}$, as shown in the diagram below.



(a) Find the height, h , of the trapezoid.

[2 marks]

Question 1b

(b) Find the area of the trapezoid.

[4 marks]

Question 2

The distance between Ho Chi Minh City and Hong Kong is known to be 1500 km. The bearing of Hong Kong from Ho Chi Minh City is 046° . Another city, Brisbane, is 6500 km from Ho Chi Minh City on a bearing of 136° . Calculate the distance between Hong Kong and Brisbane.

[3 marks]

Question 3a

Point A has coordinates $(4, -6)$ and point B has coordinates $(8, 6)$.

(a) Calculate the distance of the line segment AB.

[2 marks]

Question 3b

(b) Find the equation of the line connecting points A and B.

Give your answer in the form $y = mx + c$.

[2 marks]

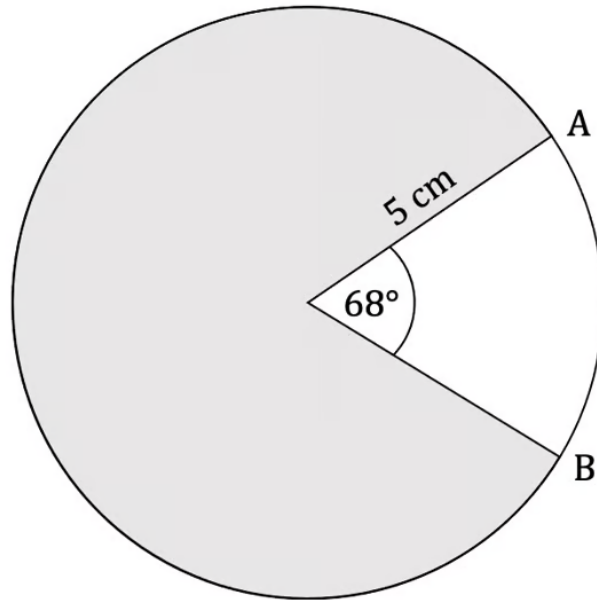
Question 3c

- (c) (i) Find the midpoint of [AB].
- (ii) Find the equation of the perpendicular bisector to the line segment AB.
Give your answer in the form $y = mx + c$.

[4 marks]

Question 4a

The diagram below shows a circle with a 68° sector cut from it. The radius of the circle is 5 cm.



(a) Find the length of

- (i) the minor arc AB
- (ii) the major arc AB.

[3 marks]

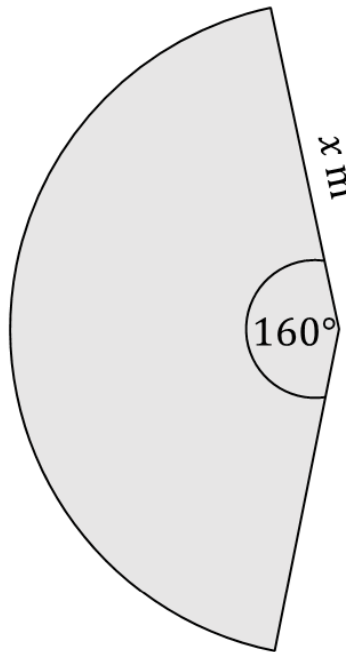
Question 4b

(b) Find the area of the shaded region.

[3 marks]

Question 5a

A lawn sprinkler sprays water over a lawn covering an arc of 160° with a maximum spray distance of x m as shown in the diagram below. The lawn sprinkler waters 20 m^2 of the lawn.



(a) Calculate the value of x .

[4 marks]

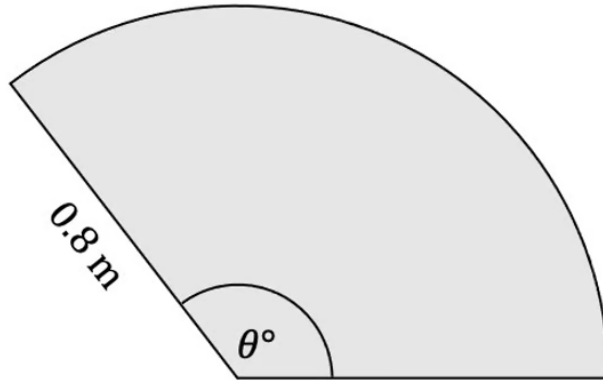
Question 5b

(b) Calculate the length of the outer arc.

[3 marks]

Question 6a

A windscreen wiper blade is 0.8 m long. When in motion the blade moves through an arc of θ° and wipes an area of $\frac{4}{15}\pi \text{ m}^2$.



(a) Calculate the value of θ .

[4 marks]

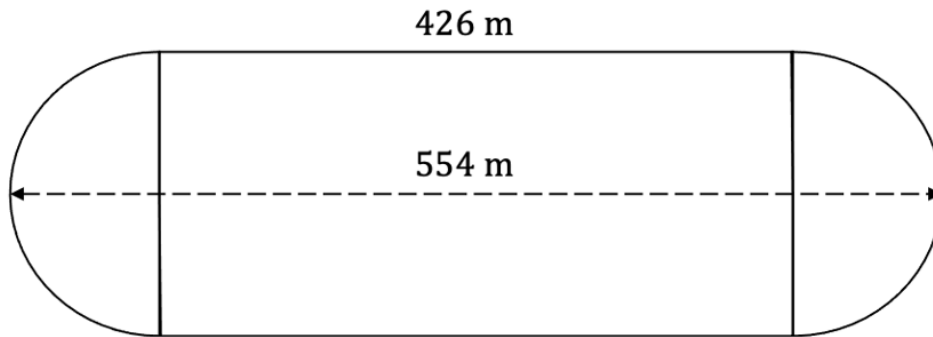
Question 6b

(b) Calculate the length travelled by the outer edge of the blade.

[3 marks]

Question 7a

The diagram below shows a dirt racetrack where the straights are 426 m long and the longest distance from one end of the track to the other is 554 m.



(a) Find the total distance around the racetrack.

[3 marks]

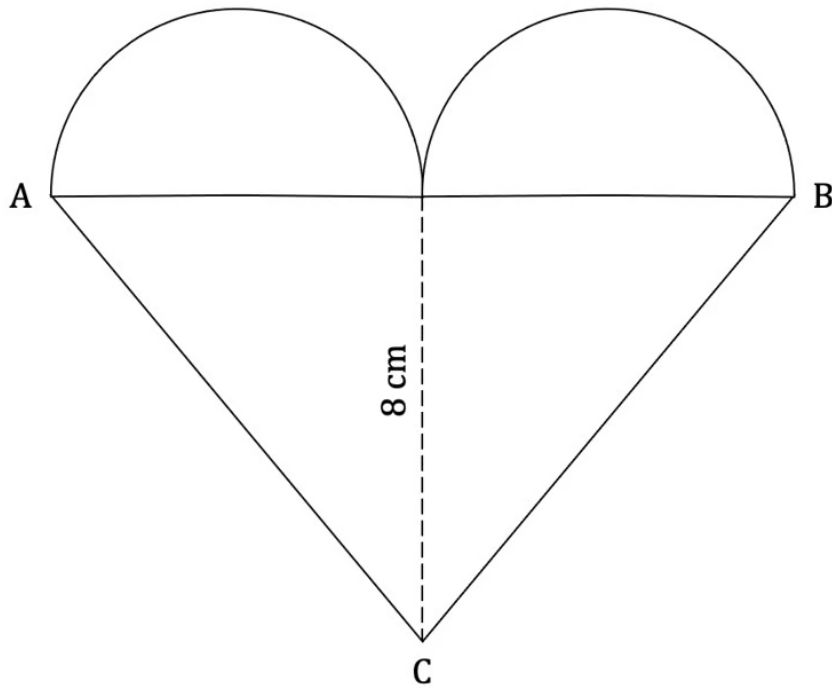
Question 7b

(b) Find the total area enclosed by the racetrack.

[4 marks]

Question 8a

The diagram below shows a cookie cutter in the shape of a heart constructed from a triangle and two identical semi circles. The height of the triangle is 8 cm and its base AB is 13.34 cm.



(a) Find the length of the line AC.

[2 marks]

Question 8b

(b) Calculate the total area of the heart.

[4 marks]

Question 8c

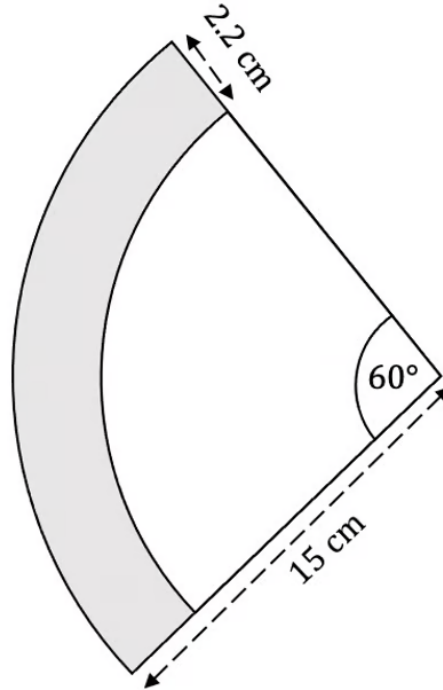
Bob makes some cookie dough and rolls it out on his kitchen bench. The cookie dough covers 1314 cm^2 .

(c) Find the number of **full** cookies Bob can cut from the dough.

[2 marks]

Question 9a

The diagram below shows a slice of pizza that forms a sector of a circle with an arc of 60° and radius of 15 cm. The width of the crust is 2.2 cm.



(a) Find the perimeter of the slice of pizza.

[3 marks]

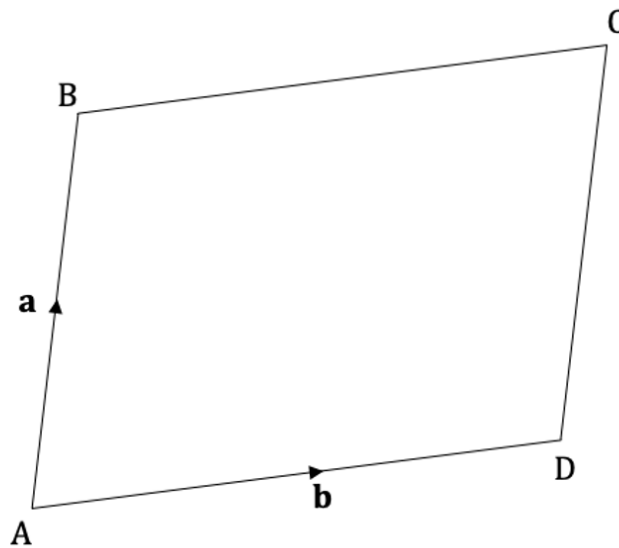
Question 9b

(b) Find the area of the crust.

[3 marks]

Question 10a

A parallelogram ABCD is shown in the diagram below.



$$\overrightarrow{AB} = \mathbf{a} \text{ and } \overrightarrow{AD} = \mathbf{b}.$$

A new line is added to the diagram connecting B to D.

A point X lies $\frac{2}{3}$ of the way along \overrightarrow{BD} .

(a) Express \overrightarrow{CX} in terms of \mathbf{a} and \mathbf{b} .

[4 marks]

Question 10b

A new point Y lies on the line CD such that AXY is a straight line.

(b) Express \overrightarrow{AY} in terms of **a** and **b**.

[3 marks]

Question 11a

Three points are located at A(0, 5), B(6, 4) and C(16, 8).

(a) (i) Find the magnitude of vector \overrightarrow{AB} .

(ii) Find the magnitude of vector \overrightarrow{BC} .

[4 marks]

Question 11b

(b) Given that the angle \widehat{ABC} is a right angle, find the area of triangle ABC.

[2 marks]

Question 12a

The points A, B, C and D have position vectors \mathbf{a} , \mathbf{b} , \mathbf{c} and \mathbf{d} , relative to the origin O.

The position vectors are given by

$$\mathbf{a} = 2i + 4j - k$$

$$\mathbf{b} = -ri + j + 2k$$

$$\mathbf{c} = 3i + sj$$

$$\mathbf{d} = 2i - 2j - tk$$

where r , s and t are constants.

(a) Given that $\overrightarrow{BA} = \overrightarrow{CD}$, find r , s and t

[5 marks]

Question 12b

A fifth point, E, has position vector \mathbf{e} , relative to the origin O.

(b) Given that $\overrightarrow{AE} = 3\overrightarrow{CD}$, find the position vector of E.

[5 marks]

Question 12c

(c) Find the unit vector that has the same direction as \mathbf{e} .

[2 marks]