

1.2 Reacting Masses & Volumes

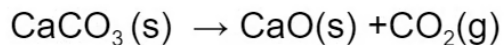
Question Paper

Course	DP IB Chemistry
Section	1. Stoichiometric Relationships
Topic	1.2 Reacting Masses & Volumes
Difficulty	Easy

Time allowed: 20
Score: /10
Percentage: /100

Question 1

When calcium carbonate is heated it decomposes according to the following equation



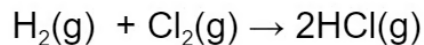
If 6.00g of calcium carbonate is heated and produces 2.73g of calcium oxide, what is the percentage yield of calcium oxide? (M_r $\text{CaCO}_3 = 100$; $\text{CaO} = 56$)

- A** $\frac{56 \times 6.00 \times 100}{2.73}$
- B** $\frac{2.73 \times 100 \times 100}{56 \times 6.00}$
- C** $\frac{56 \times 6.00 \times 100}{2.73 \times 100}$
- D** $\frac{2.73 \times 100}{56 \times 6.00}$

[1 mark]

Question 2

Hydrogen and chlorine react according to the following equation



When 1.5 moles of chlorine reacts with 2.0 moles of hydrogen, what will be the result?

- A** 3.5 mol of HCl
- B** 1.5 mol of HCl and 0.5 mol of H₂
- C** 2.0 mol of HCl and 0.5 mol of Cl₂
- D** 3.0 mol of HCl and 0.5 mol of H₂

[1 mark]

Question 3

25.0 cm³ of hydrochloric acid solutions reacts with 36.2 cm³ of 0.225 mol dm⁻³ sodium hydroxide solution. The concentration of the acid is

A $\frac{36.2 \times 0.225}{25.0}$

B $\frac{25.0 \times 0.225}{36.2}$

C $\frac{25.0 \times 0.225}{1000 \times 36.2}$

D $\frac{36.2 \times 0.225}{1000 \times 25.0}$

[1 mark]

Question 4

Which amount of the following substances contains the smallest quantity of ions?

A 2 mol of KOH

B 1 mol of NH₄Br

C 2 mol of MgCl₂

D 1 mol of Fe₂O₃

[1 mark]

Question 5

A solution of sodium chloride is made by adding 300 cm^3 of water to a flask containing 200 cm^3 of 0.5 mol dm^{-3} sodium chloride. What is the concentration of the resulting solution?

- A** 0.05 mol dm^{-3}
- B** 0.1 mol dm^{-3}
- C** 0.2 mol dm^{-3}
- D** 0.3 mol dm^{-3}

[1 mark]

Question 6

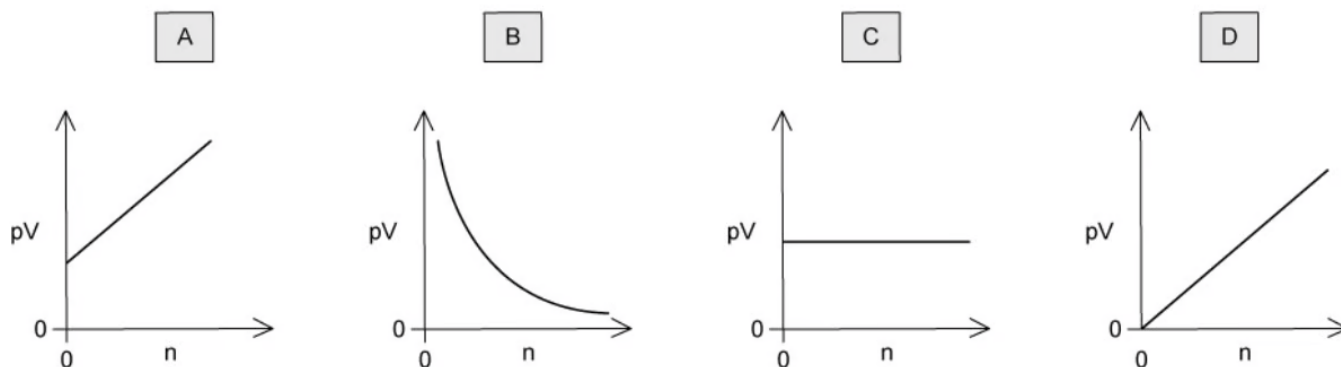
What is the number of molecules in 500 cm^3 of oxygen under standard conditions?

- A** $6.02 \times 10^{23} \times 0.5$
- B** $6.02 \times 10^{23} \times 500$
- C** $\frac{22.7}{0.5} \times 6.02 \times 10^{23}$
- D** $\frac{0.5}{22.7} \times 6.02 \times 10^{23}$

[1 mark]

Question 7

For an ideal gas at constant pressure and temperature, which diagram shows the correct graph of pV against n ?



[1 mark]

Question 8

The M_r value of a gas can be calculated from the ideal gas equation.

Which expression will give the value of M_r for a sample of a gas of mass m in grams?

A $M_r = \frac{mRT}{pV}$
 B $M_r = \frac{pVRT}{m}$
 C $M_r = \frac{mpV}{RT}$
 D $M_r = \frac{pV}{mRT}$

[1 mark]

Question 9

Which of the following least resembles an ideal gas at room temperature?

- A** helium
- B** ammonia
- C** carbon dioxide
- D** hydrogen

[1 mark]

Question 10

The ideal gas equation below summarises the gas laws.

$$pV = nRT$$

Which statement below is correct?

- A** there exist intermolecular forces of attraction between gas molecules
- B** ideal gas molecules will collide inelastically upon impact with each other
- C** one mole of an ideal gas occupies the same volume under the same conditions of temperature and pressure
- D** the volume of a given mass of an ideal gas is doubled if its temperature is raised from 25 °C to 50 °C

[1 mark]