

5.1 Energetics

Question Paper

Course	DPIB Chemistry
Section	5. Energetics / Thermochemistry
Topic	5.1 Energetics
Difficulty	Hard

Time allowed: 20
Score: /10
Percentage: /100

Question 1

In a calorimetric experiment 2.50 g of a fuel is burnt in oxygen. 30 % of the energy released during the combustion is absorbed by 500 g of water, the temperature of which rises from 25 °C to 68 °C.

The specific heat capacity of water is $4.2 \text{ J g}^{-1} \text{ K}^{-1}$.

What is the total energy released per gram of fuel burnt?

- A. $\frac{500 \times 4.2 \times (68 - 25)}{2.5}$
- B. $\frac{500 \times 4.2 \times (273 + (68 - 25)) \times 100}{30 \times 2.5}$
- C. $\frac{500 \times 4.2 \times (68 - 25) \times 100}{30 \times 2.5}$
- D. $\frac{500 \times 4.2 \times (68 - 25) \times 100}{30}$

[1 mark]

Question 2

The reaction of hydrochloric acid with sodium hydroxide produced an overall temperature increase of 24.4 K.

Given the following data, how much thermal energy was evolved during this reaction?

Initial temperature of 25.0 cm³ hydrochloric acid = 17.6 °C

Initial temperature of 25.0 cm³ sodium hydroxide = 18.5 °C

The specific heat capacity of water is $4.18 \text{ J g}^{-1} \text{ K}^{-1}$.

- A. $(25.0 \times 4.18 \times 6.8) + (25.0 \times 4.18 \times 5.9)$
- B. $\frac{(25.0 \times 4.18 \times 6.8) + (25.0 \times 4.18 \times 5.9)}{2}$
- C. $50.0 \times 4.18 \times \left(\frac{6.8 + 5.9}{2}\right)$
- D. $(50.0 \times 4.18 \times 6.8) + (50.0 \times 4.18 \times 5.9)$

[1 mark]

Question 3

The temperature rise when 0.1 MJ of heat energy is absorbed by 2.5 kg of solid aluminium is 44.4 °C.

What is the specific heat capacity of aluminium, in $\text{J g}^{-1} \text{K}^{-1}$?

- A. $\frac{100000}{2.5 \times 44.4}$
- B. $\frac{100000}{2500 \times 44.4}$
- C. $\frac{0.1}{2.5 \times 44.4}$
- D. $\frac{0.1}{2500 \times 44.4}$

[1 mark]

Question 4

An iron cube, with a mass of 0.5 kg, increases in temperature by 12.7 K when heated.

The specific heat capacity of iron is $0.448 \text{ J K}^{-1} \text{g}^{-1}$.

What is the enthalpy change, in kJ mol^{-1} , for heating the iron cube?

- A. $0.448 \times 12.7 \times 55.85$
- B. $\frac{0.448 \times 12.7 \times 500^2}{1000 \times 55.85}$
- C. $\frac{0.448 \times 12.7 \times 55.85}{1000}$
- D. $-\frac{0.448 \times 12.7 \times 55.85}{1000}$

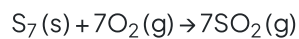
[1 mark]

Question 5

When completing experiments to measure enthalpy change for exothermic processes, which of the following is **not** a reason for the experimental data to be lower than the expected value?

- A. Heat loss through convection
- B. Water vapour released as a product
- C. An inadequate supply of oxygen during combustion
- D. Heat transfer to the system

[1 mark]

Question 6Heptathiepane, S_7 , can undergo complete combustion to form sulfur dioxide.

Which enthalpy changes can be used to describe this reaction?

	ΔH_f^θ	ΔH_c^θ	ΔH_r
A	✓	x	✓
B	x	✓	✓
C	x	✓	x
D	x	x	✓

[1 mark]

Question 7

A student obtained the following experimental results for the enthalpy of combustion of cyclohexane (C_6H_{12}).

Mass of water / g	50.00
Initial temperature of the water / °C	19.60
Initial mass of spirit burner and cyclohexane / g	186.79
Final mass of spirit burner and cyclohexane / g	186.29

The student determined from this experiment that the enthalpy of combustion of cyclohexane is $-1216 \text{ kJ mol}^{-1}$

The specific heat capacity of water = $4.18 \text{ J g}^{-1} \text{ K}^{-1}$

The relative molecular mass (M_r) of cyclohexane = 84.18

Which calculation will correctly determine the final temperature of the water in this experiment?

A. $19.60 + \frac{608}{50.00 \times 4.18 \times 84.18}$

B. $19.60 + \frac{60800}{5.00 \times 4.18 \times 84.18}$

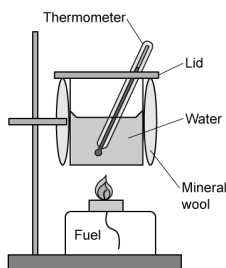
C. $19.60 + \frac{1216 \times 84.18}{25.00 \times 4.18}$

D. $19.60 + \frac{1216000 \times 84.18}{25.00 \times 4.18}$

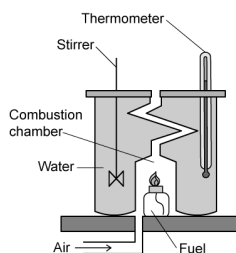
[1 mark]

Question 8

The diagrams below show a simple calorimeter that is commonly used in the school laboratory and the more accurate chamber calorimeter.



Simple calorimeter



Chamber calorimeter

Which of the following statements correctly explain why the chamber calorimeter is more accurate?

- I. There is less heat loss
- II. There is more complete combustion
- III. There is less fuel lost

- A. I and II only
- B. I and III only
- C. II and III only
- D. I, II and III

[1 mark]

Question 9

Which of the following assumptions are correct when completing the calorimetry experiment and subsequent calculations for the neutralisation of 25.0 cm^3 sulfuric acid by 25.0 cm^3 barium hydroxide?

- I. That both solutions have the same initial temperature
- II. The value of m in $q = mc\Delta T$ is 50 g
- III. Heat is lost to the surroundings

- A. I and II only
- B. I and III only
- C. II and III only
- D. I, II and III

[1 mark]

Question 10

The heat produced by the combustion of magnesium is used to heat some water.

Which values are needed to calculate the energy transferred during the reaction?

- I. The mass of magnesium
- II. The mass of the water
- III. The temperature change of the water

- A. I and II only
- B. I and III only
- C. II and III only
- D. I, II and III

[1 mark]