

3.3 Trigonometry

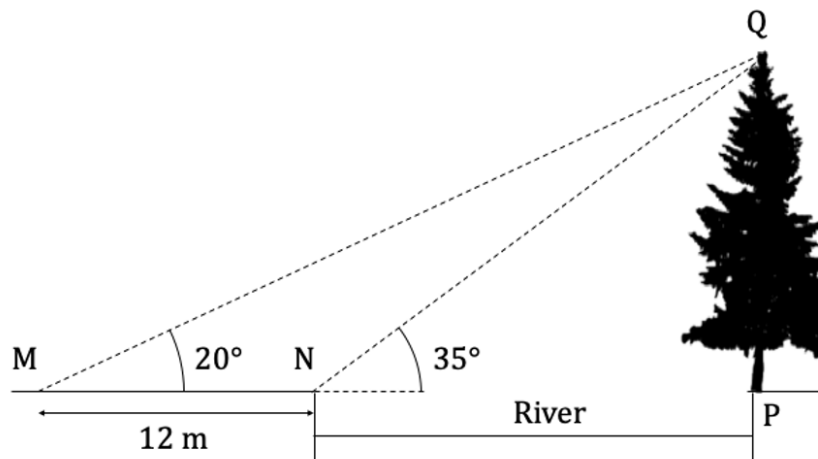
Question Paper

Course	DPIB Maths
Section	3. Geometry & Trigonometry
Topic	3.3 Trigonometry
Difficulty	Hard

Time allowed: 90
Score: /73
Percentage: /100

Question 1a

Adah would like to estimate the height of a tree located at point P on the edge of a riverbank, with the top of the tree at point Q. However, due to a raging river, she is unable to reach the base of the tree. From point M she measures an angle of elevation of 20° to the top of the tree, and then from point N (which is on the edge of Adah's bank of the river) she measures an angle of elevation of 35° to the top of the tree. Between the points M and N she measures a horizontal distance of 12 m. Points M, N and P all lie on a single horizontal line, and point Q is vertically above point P. The diagram below shows this information.



(a) Calculate the length of NQ.

[3 marks]

Question 1b

(b) Calculate the height of the tree.

[2 marks]

Question 1c

Adah borrows a boat and crosses the river at a rate of 50 metres per 15 minutes.

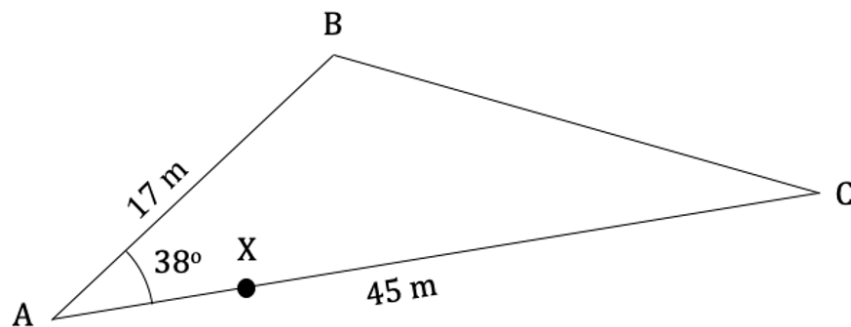
(c) Assuming that she crosses in a straight line directly from point N to point P, find out how long it takes her to cross the river.

[3 marks]

Question 2a

The diagram below shows a triangular field on a farm. $AB = 17\text{ m}$, $AC = 45\text{ m}$ and angle $\widehat{BAC} = 38^\circ$.

X is a point on AC, such that $AX : XC$ is $1 : 4$.



The field is going to be used for livestock, so a fence is to be installed around its perimeter.

(a) Calculate the total length of fencing required.

[3 marks]

Question 2b

The owner of the field had estimated the length of fence required to be 98 m.

(b) Calculate the percentage error in her estimation.

[2 marks]

Question 2c

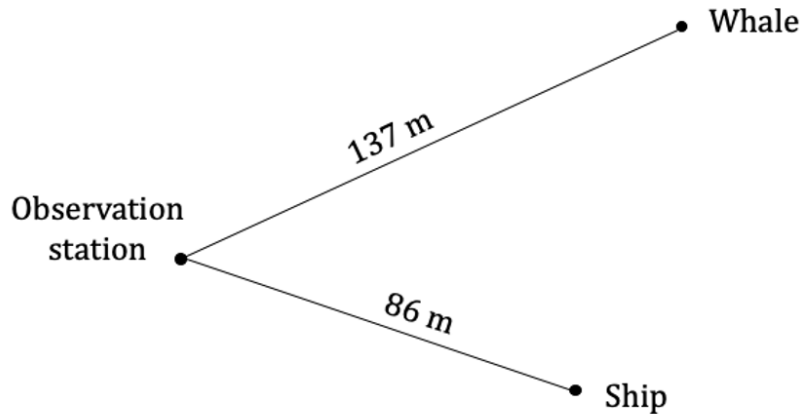
The field is to be divided into two parts by installing a new fence connecting B to X.

(c) Calculate the area of BXC.

[4 marks]

Question 3a

The diagram below shows a ship that is located 86 m from an observation station, and a whale that has been spotted from the observation station at a distance of 137 m.



The bearing of the ship from the observation station is 110° and the whale is located along a bearing of 072° from the observation station.

(a) Calculate the distance between the ship and the whale.

[3 marks]

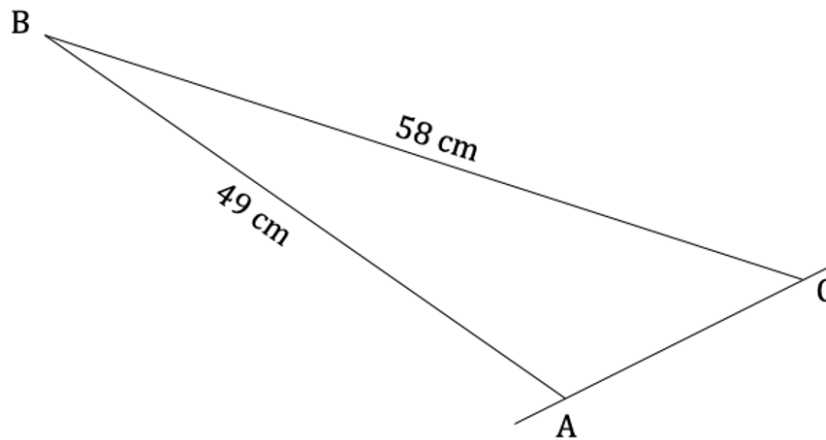
Question 3b

(b) Work out the bearing that the ship needs to travel on to reach the whale. Give your answer to 1 decimal place.

[4 marks]

Question 4a

The cross-section of a unicorn horn can be modelled by the triangle ABC shown in the diagram below. The length $AB = 49$ cm and length $BC = 58$ cm. The cross-sectional area of the horn is 168 cm².



(a) Find the size of the angle \widehat{ABC} formed at the tip of horn.

[3 marks]

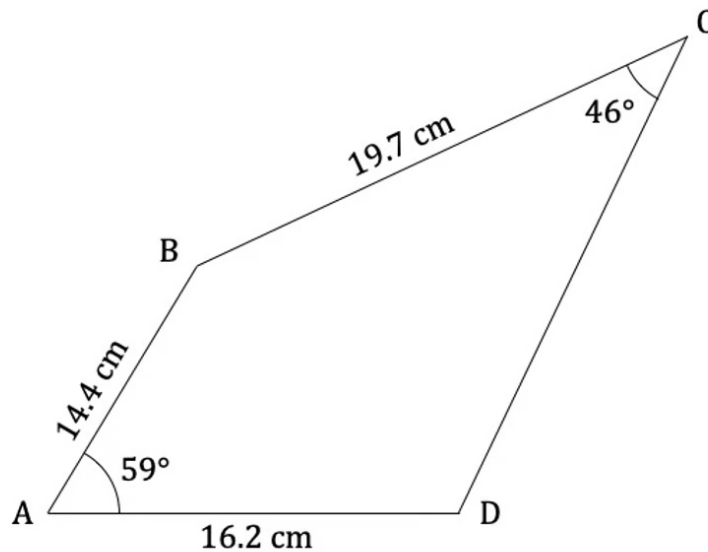
Question 4b

(b) Calculate the length of the base AC that is attached to the unicorn's head.

[3 marks]

Question 5a

The diagram below shows a quadrilateral ABCD. Angle $\widehat{BAD} = 59^\circ$ and angle $\widehat{BCD} = 46^\circ$.
 $AB = 14.4$ cm, $AD = 16.2$ cm and $BC = 19.7$ cm.



(a) Calculate the length BD.

[2 marks]

Question 5b

(b) Find the size of the angle \widehat{CDB} .

[2 marks]

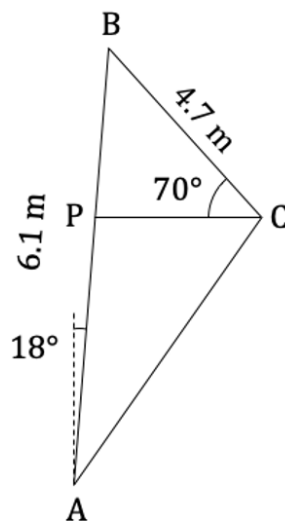
Question 5c

(c) Show that the area of the quadrilateral is 235 cm^2 correct to the nearest cm^2 .

[2 marks]

Question 6a

The diagram below shows the triangular sail of a windsurfing board, ABC , with a horizontal boom PC . $AB = 6.1 \text{ m}$ and makes an angle of 18° to the vertical. $BC = 4.7 \text{ m}$ and $\widehat{BCP} = 70^\circ$.



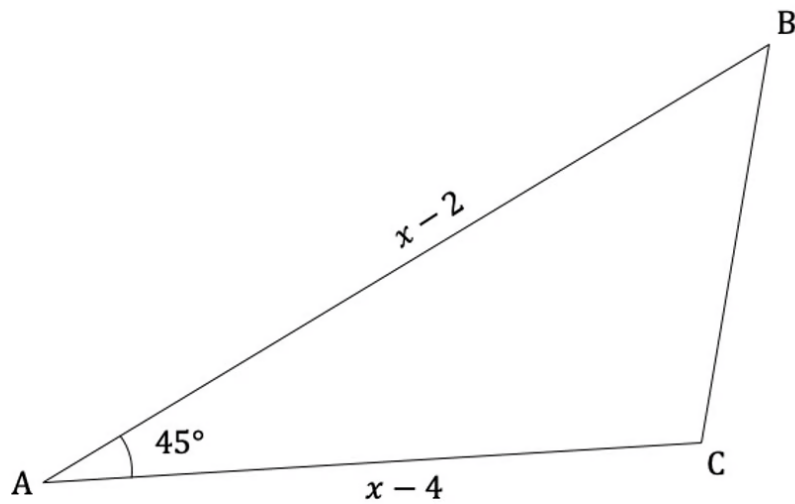
(a) Find the area of the whole sail.

[4 marks]

Question 6b

(b) Calculate the length of the boom PC.

[2 marks]

Question 7aThe area of triangle ABC is $12\sqrt{2}$.(a) Calculate the value of x .

[5 marks]

Question 7b

(b) Hence, find BC.

[3 marks]

Question 7c

Heron's formula states that it is actually possible to find the area of any triangle given only its side lengths a , b and c .

$$\text{Area} = \sqrt{s(s - a)(s - b)(s - c)}$$

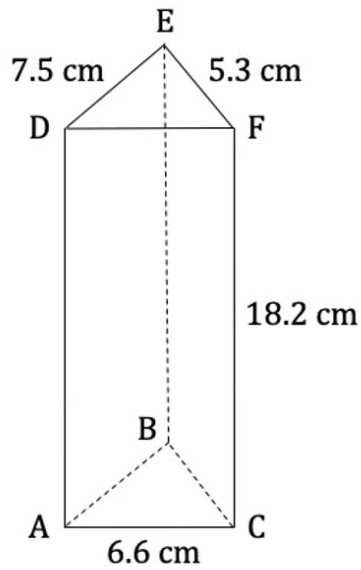
The value of s is known as the 'half perimeter' where $s = \frac{a+b+c}{2}$

(c) Verify that Heron's formula works for triangle ABC.

[3 marks]

Question 8a

The diagram shows a triangular prism ABCDEF of height 18.2 cm. $ED = 7.5$ cm, $EF = 5.3$ cm and $AC = 6.6$ cm.



M is the midpoint of BC.

(a) Calculate the length DM.

[5 marks]

Question 8b

(b) Find the size of the angle \widehat{EMD} .

[3 marks]

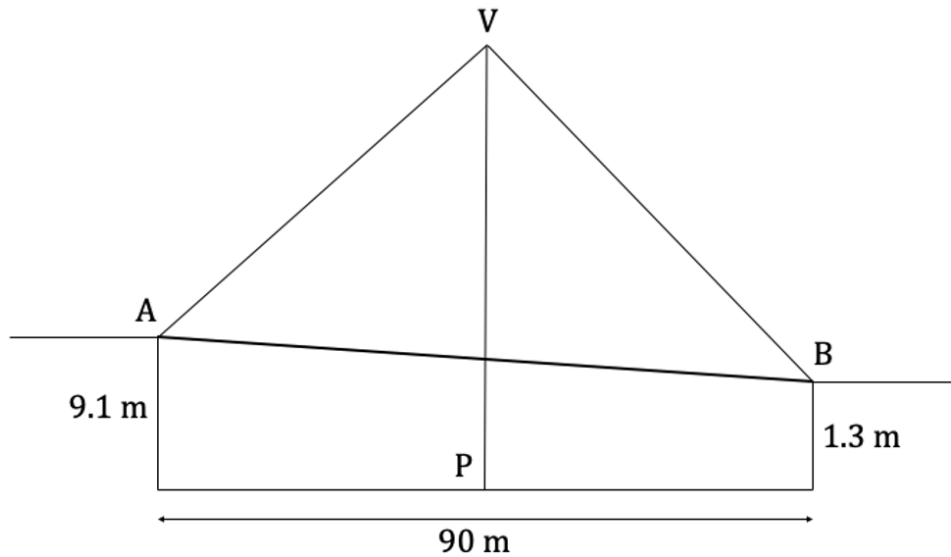
Question 8c

(c) Find the area of the triangle EDM.

[2 marks]

Question 9a

The diagram below shows a cable-stayed bridge crossing a river from A to B. The height of the embankment at A, measured from the horizontal river bed, is 9.1 m and this drops to a height of 1.3 m at B. The width of the river bed is 90 m. A vertical central column of height 15 m is situated at the midpoint of the river bed, P, and connects to the exterior supporting cables at point V. The other ends of the cables are attached at points A and B respectively.



(a) Find the size of angle \widehat{VBA} , between the exterior supporting cable and the bridge span.

[4 marks]

Question 9b

(b) Calculate the total length of the two exterior supporting cables.

[6 marks]