

5.2 Heating Effect of Electric Currents

Question Paper

Course	DPIB Physics
Section	5. Electricity & Magnetism
Topic	5.2 Heating Effect of Electric Currents
Difficulty	Easy

Time allowed: 80
Score: /66
Percentage: /100

Question 1a

In circuit building a set of agreed symbols is in use worldwide to represent components.

(a)
For each description below, write the name and draw the correct symbol which would be used in a circuit diagram.

(i)
A resistor whose resistance depends on the light intensity. [2]

(ii)
A component with zero resistance which measures the current in the circuit. [2]

(iii)
The component which is used to convert ac current to dc current; it also allows current to flow in only one direction. [2]

[6 marks]

Question 1b

(b)

In each case select the word to correctly describe an ammeter.

- In a circuit the **current/voltage/resistance** is measured using an ammeter, which is always connected in **series/parallel** within a circuit.
- An ideal ammeter should have **very high/zero** resistance. This prevents the ammeter taking any energy from the **electrons/positive ions** flowing through it.
- If the electrons transferred their **electricity/energy/motion** to the ammeter this would change the circuit by **reducing/increasing** the value of the current it is meant to measure.

[3]

[3 marks]

Question 1c

A charge of 15.0 C passes through a resistor at a constant rate in 60 s. The potential difference across the resistor is 2.0 V.

(c)

Calculate the resistance R of the resistor.

[3]

[3 marks]

Question 1d

(d)

The resistance of a wire is affected by factors including the resistivity of the material it is made from.

(i)

Define resistivity.

[2]

(i)

State two other factors apart from temperature which affects the resistance of a wire. For each one identify whether the relationship is directly or inversely proportional to resistance.

[2]

[4 marks]

Question 2a


A student is building a circuit using three resistors, each with a value of $5.0\ \Omega$. The student arranges the resistors first in series and then in parallel, as shown.

(a)

Determine the total resistance in each case.

(i)

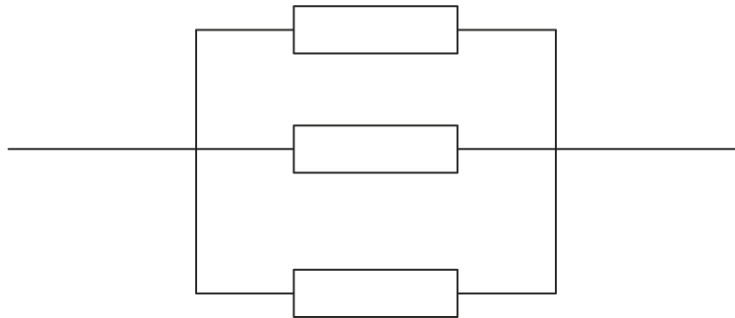
Three $5.0\ \Omega$ resistors in series



[2]

(ii)

Three $5.0\ \Omega$ resistors in parallel

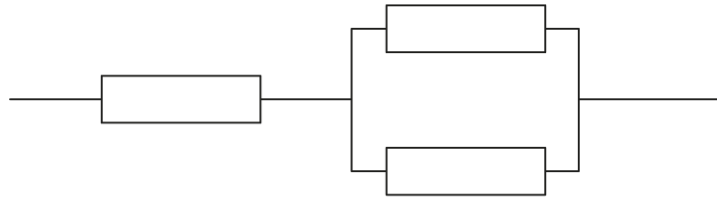


[2]

[4 marks]

Question 2b

The student arranges the identical 5.0Ω resistors so that they are in a combination of series and parallel as shown.



(b)
Calculate the new combined resistance.

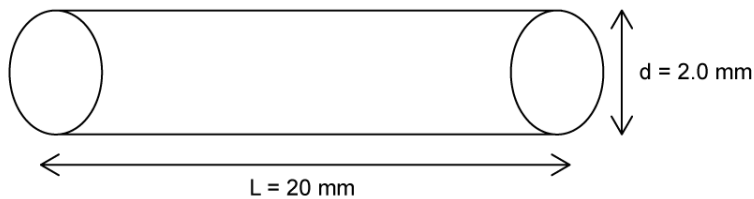
[3]

[3 marks]

Question 2c

An electrically-conducting wire is made from copper. Copper has resistivity $\rho = 1.7 \times 10^{-8} \Omega \text{ m}$.

The wire has diameter $d = 2.0 \text{ mm}$ and length $L = 20 \text{ mm}$ as shown.



(c)
For the wire calculate

(i)
The cross-sectional area of the wire

[2]

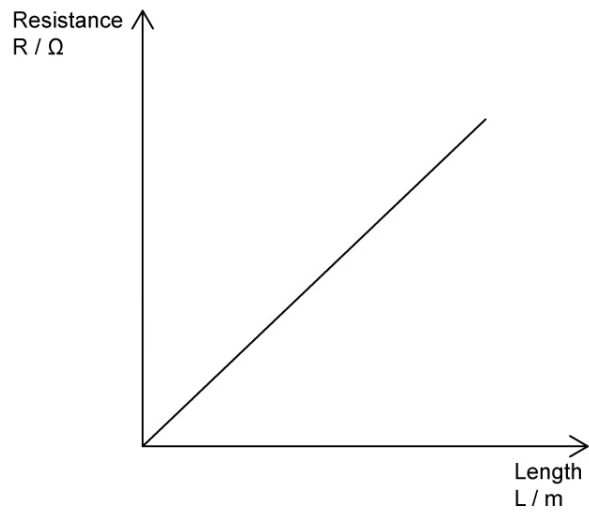
(ii)
The resistance of the wire

[2]

[4 marks]

Question 2d

A student investigating the resistivity of a sample of wire has plotted a graph of resistance against length as shown.



(d)

Explain how the graph can be used to determine the resistivity of the wire.

[3]

[3 marks]

Question 3a

(a)

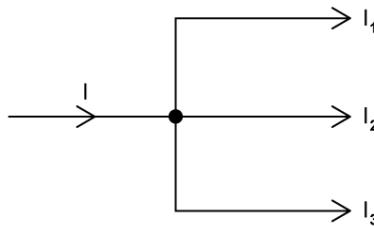
Define resistance.

[2]

[2 marks]

Question 3b

The simple circuit diagram shown illustrates Kirchoff's First Law.



(b)

State the law in words.

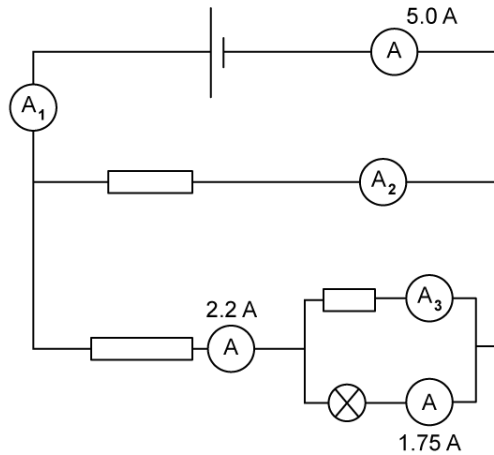
[2]

[2 marks]

Question 3c

(c)

For the circuit shown determine the values on the ammeters. A_1 , A_2 and A_3 .



[3]

[3 marks]

Question 3d

(d)

For Kirchhoff's second law

(i)

State Kirchhoff's Second Law.

[2]

(ii)

Complete the sentence;

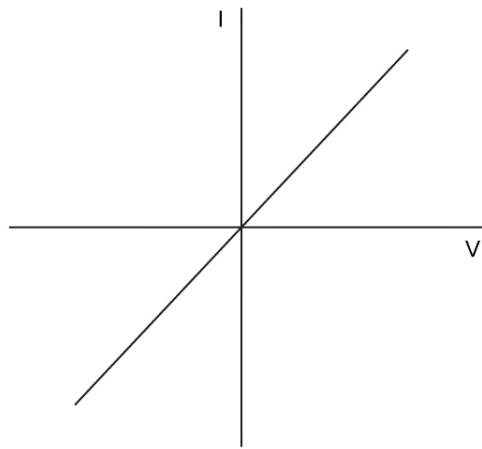
Kirchhoff's First Law is a consequence of the conservation of _____ while Kirchhoff's Second Law is a consequence of the conservation of _____.

[2]

[4 marks]

Question 4a

The graph shown represents current and potential difference for an Ohmic resistor.



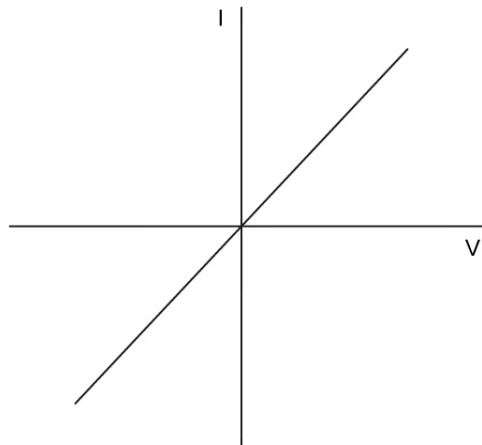
- a)
State the features of the graph which show that the resistor obeys Ohm's Law.

[2]

[2 marks]

Question 4b

A student investigating the I-V characteristics of various components plots the graph shown.



(b)

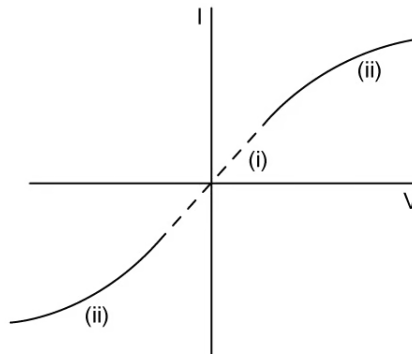
Outline how to find the resistance of the component from the graph.

[3]

[3 marks]

Question 4c

The graph shown represents the I-V characteristics of a non-Ohmic resistor such as a lamp.



(c)

The graph consists of three distinct parts.

(i)

For the section labelled (i) outline the behaviour of the resistor.

[2]

(ii)

For the two similar sections labelled (ii) outline the behaviour of the resistor.

[3]

[5 marks]

Question 4d

Heating is typically seen in electrical components and must be accounted for so that they operate safely and efficiently.

(d)

State two factors which increase the amount of heat output.

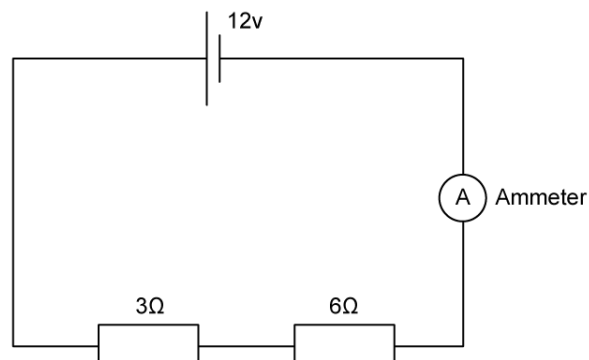
[2]

[2 marks]

Question 5a

(a)

For the series circuit shown, calculate



(i)

Total resistance.

[2]

(ii)

Current measured by the ammeter

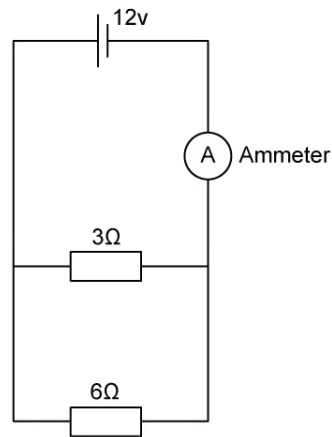
[2]

[4 marks]

Question 5b

(b)

For the parallel circuit shown, calculate



(i)

Total resistance.

[2]

(ii)

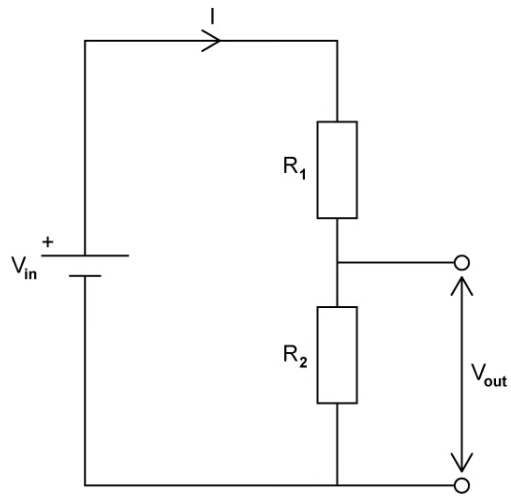
Current measured by the ammeter

[2]

[4 marks]

Question 5c

The potential divider circuit shown is to be adapted to become a sensing circuit for temperature.



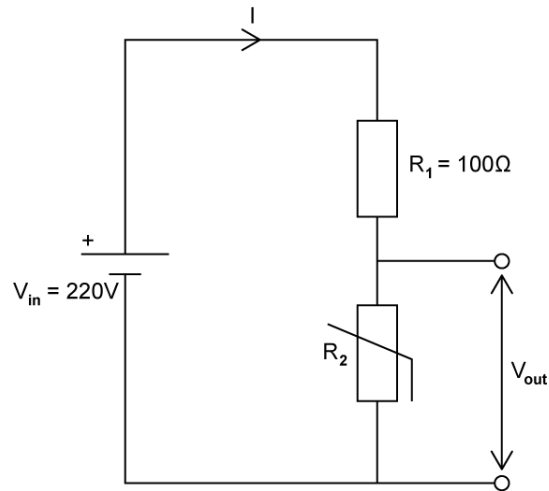
(c)
Suggest a change which would enable this.

[2]

[2 marks]

Question 5d

The sensing circuit in part (c) has been built using a thermistor placed in parallel to the output voltage, with a fixed resistor R_1 of $100\ \Omega$, and an input voltage, V_{in} of $220\ \text{V}$ as shown.



At a certain temperature the thermistor has resistance $R_2 = 20\ \Omega$.

(d)

Determine the output voltage at this temperature.

[3]

[3 marks]