

10.2 Functional Group Chemistry

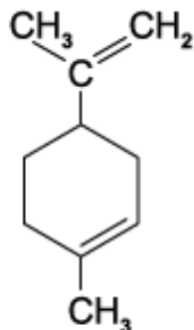
Question Paper

Course	DPIB Chemistry
Section	10. Organic Chemistry
Topic	10.2 Functional Group Chemistry
Difficulty	Hard

Time allowed: 20
Score: /10
Percentage: /100

Question 1

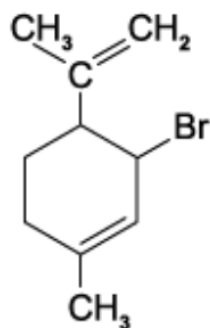
Limonene is an oil formed in the peel of citrus fruits.



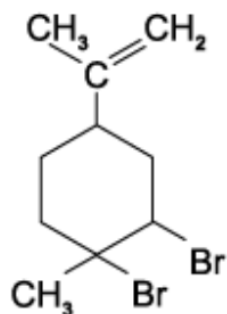
Limonene

Which product is formed when an excess of bromine, $\text{Br}_2(l)$, reacts with limonene at room temperature in the dark?

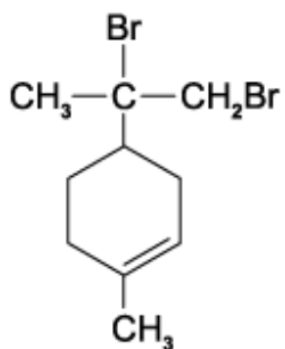
A



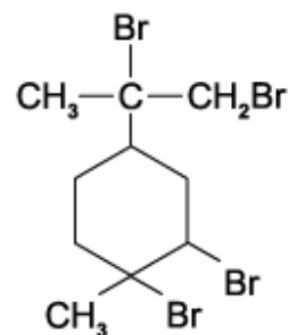
B



C



D

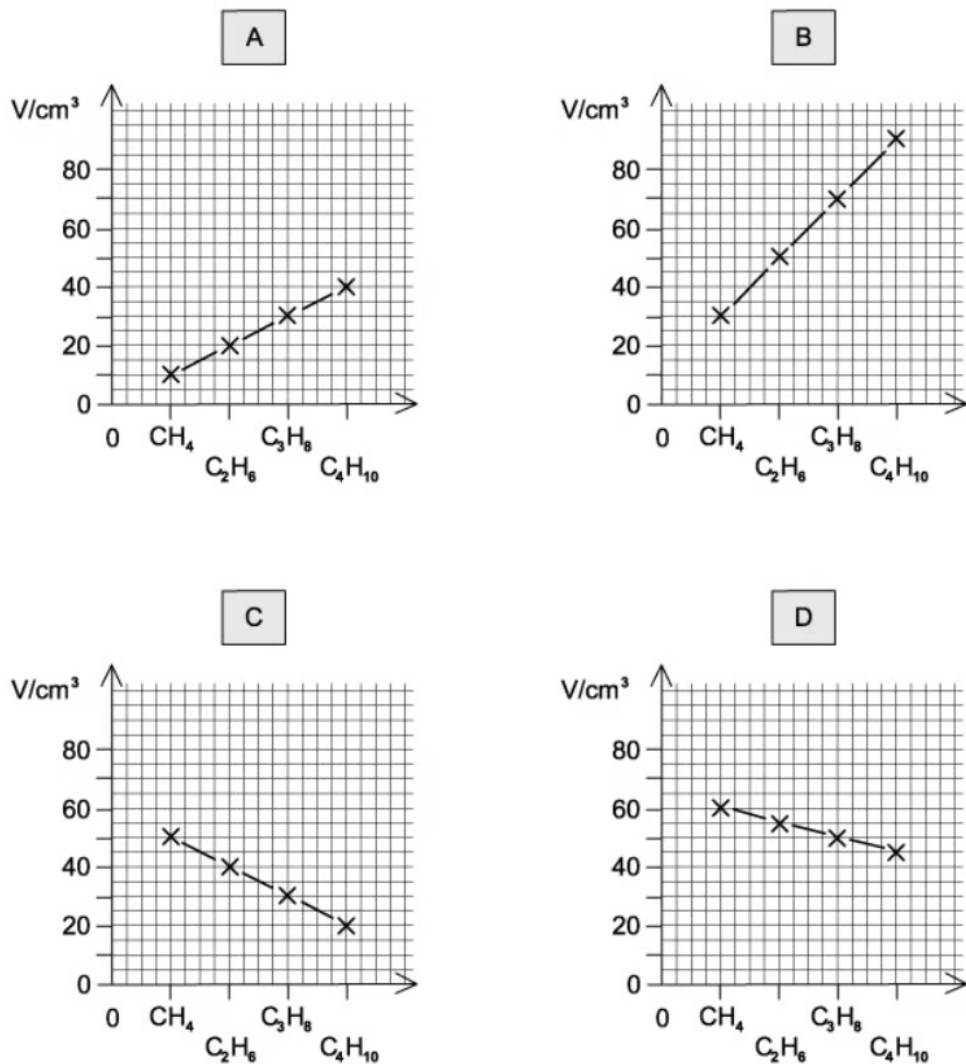


[1 mark]

Question 2

Samples of 10 cm^3 of each of the first four members of the alkane series are separately mixed with 70 cm^3 of oxygen. Each is then burned and the total volume, V , of residual gas measured again at room temperature and pressure.

Which graph represents the results that would be obtained?

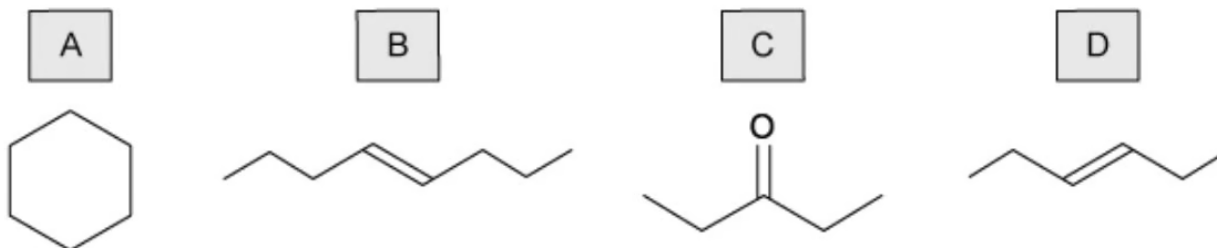


[1 mark]

Question 3

A periodic table is needed for this question

Which compound has an M_r of 84.18 and will react with HBr to give a product with an M_r of 165.09?



[1 mark]

Question 4

An organic compound **Y** with molecular formula $C_5H_{12}O$, is oxidised to compound **Z** with molecular formula $C_5H_{10}O_2$.

What could be the structural formula of **Y**?

- 1 $CH_3(CH_2)_4OH$
- 2 $CH_3CH_2CH(CH_2OH)CH_3$
- 3 $CH_3C(CH_3)_2CH_2OH$

A 1, 2 and 3 **B** 1 and 3 only **C** 2 and 3 only **D** 3 only

[1 mark]

Question 5

A periodic table is needed to answer this question

A number of alcohols with the formula $C_4H_{10}O$ are separately oxidised. Using 7.41 g of the alcohols a 50% yield of organic product is achieved.

What mass of product could be obtained?

- 1 4.41 g of butanoic acid
- 2 4.41 g of 2-methylpropanoic acid
- 3 3.61 g of butanone

A 1, 2 and 3 **B** 1 and 2 only **C** 2 and 3 only **D** 1 only

[1 mark]

Question 6

Which compound is produced in the reaction between pent-2-ene and steam?

- A** $(CH_3)_2CHCH_2CH_2OH$
- B** $CH_3CH(OH)CH_2CH_2CH_2CH_3$
- C** $CH_3CH_2CH_2CH_2CH_2OH$
- D** $CH_3CH_2CH_2CH(OH)CH_3$

[1 mark]

Question 7

When compound **T** reacts with its own oxidation product, a sweet-smelling liquid is produced.

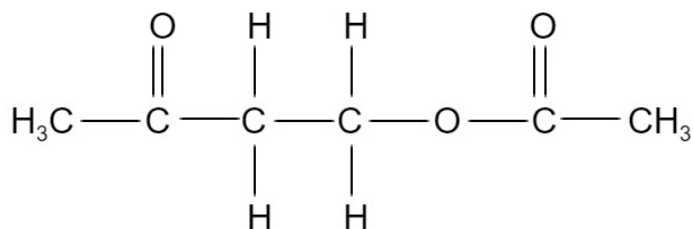
What is the identity of compound **T**?

- A** butanal
- B** butanone
- C** butan-1-ol
- D** butanoic acid

[1 mark]

Question 8

In the presence of an H^+ catalyst, compound **X** reacts with ethanoic acid to produce the compound below.



What is the molecular formula of compound **X**?

- A** $\text{C}_4\text{H}_8\text{O}$
- B** $\text{C}_4\text{H}_8\text{O}_2$
- C** $\text{C}_2\text{H}_6\text{O}_2$
- D** $\text{C}_2\text{H}_6\text{O}_3$

[1 mark]

Question 9

Compound **K**, $C_5H_{12}O$, is oxidised by acidified sodium dichromate(VI) to compound **L**.

Compound **L** reacts with butan-2-ol in the presence of a little concentrated sulfuric acid to give liquid **M**.

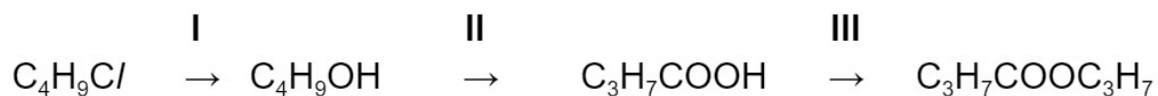
What could be the formula of liquid **M**?

- A** $(CH_3)_2CHCH_2CO_2C(CH_3)_3$
- B** $CH_3(CH_2)_3CO_2(CH_2)_3CH_3$
- C** $CH_3(CH_2)_3CO_2CH(CH_3)CH_2CH_3$
- D** $CH_3(CH_2)_2CO_2CH_2CH_2(CH_3)_2$

[1 mark]

Question 10

Shown below is a reaction sequence starting with 1-chlorobutane.



What is the correct classification of the types of reactions shown?

	I	II	III
A	substitution	oxidation	substitution
B	addition	substitution	condensation
C	oxidation	substitution	condensation
D	substitution	oxidation	condensation

[1 mark]