

9.3 Interference

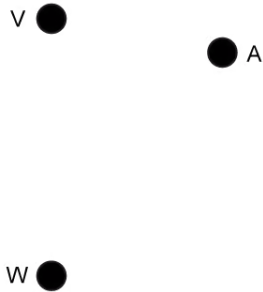
Question Paper

Course	DPIB Physics
Section	9. Wave Phenomena (HL only)
Topic	9.3 Interference
Difficulty	Medium

Time allowed: 20
Score: /10
Percentage: /100

Question 1

Waves emitted from sources V and W are initially in phase and have equal wavelengths. Point A is not equidistant between V and W. The waves interfere destructively at point A, where the path difference is 0.30 m.



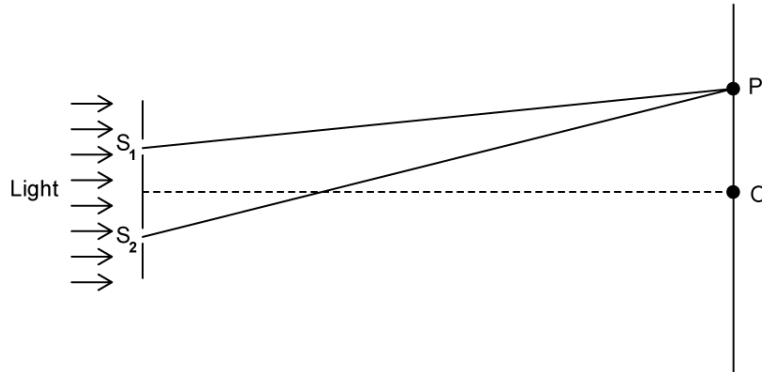
What is the maximum possible value of the wavelength of the waves?

- A. 0.60 m
- B. 0.30 m
- C. 0.20 m
- D. 0.12 m

[1 mark]

Question 2

The diagram below shows an arrangement for a two-slit interference experiment. Coherent light of frequency f is incident on two narrow parallel slits S_1 and S_2 . An interference pattern is observed on a screen a distance away. The central bright fringe is at O and the next bright fringe is at P . The speed of light is c .



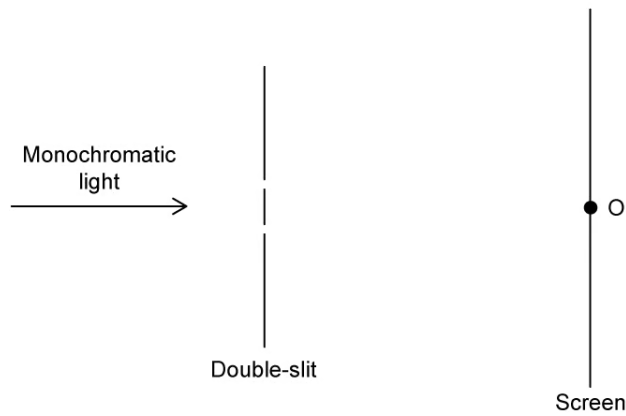
The distance $S_2P - S_1P$ is equal to

- A. $\frac{f}{c}$
- B. $\frac{c}{2f}$
- C. $\frac{c}{f}$
- D. $\frac{f}{2c}$

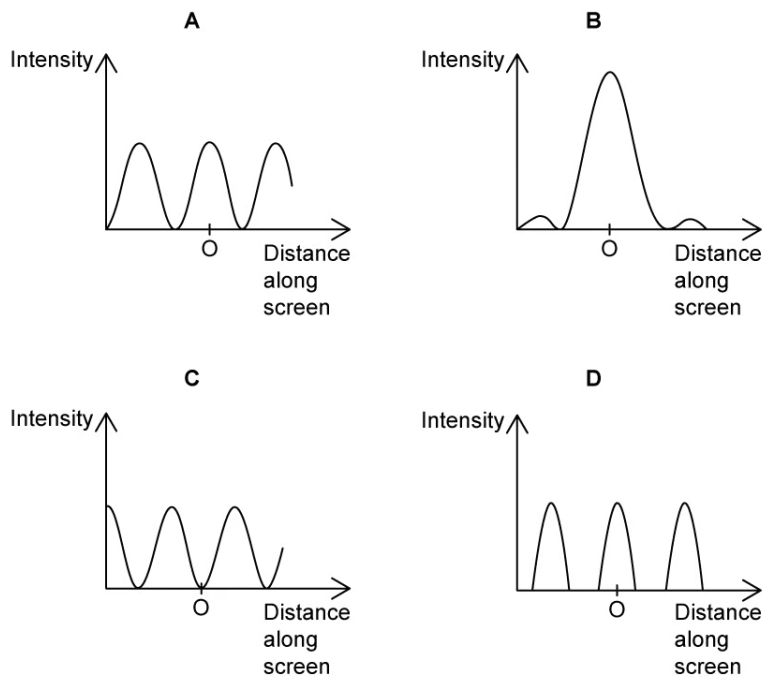
[1 mark]

Question 3

The interference of light waves is observed using a double-slit arrangement as shown below.



Which of the following best shows the intensity distribution of light at point O on the screen?



[1 mark]

Question 4

In an experiment, light incident on a diffraction grating has a first maximum of the second order in the same location as the first minimum of a single slit diffraction pattern. The light source and the distance from the slits to the screen are kept the same.

What is the relationship between the slit separation d and the slit width b ?

A. $d = 2b$

B. $d = \frac{b}{4}$

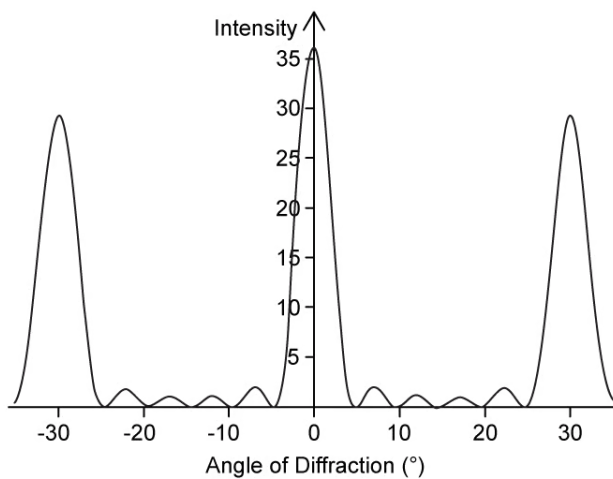
C. $d = 4b$

D. $d = \frac{b}{2}$

[1 mark]

Question 5

The graph shows the intensity pattern from the interference of monochromatic light passing through N slits.



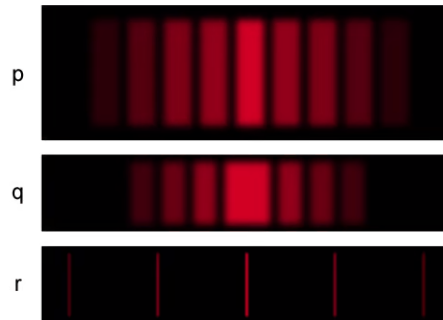
Which row gives the correct value of N and the correct relationship between the slit separation d and the wavelength λ ?

	N	Relationship
A.	6	$d = \frac{\lambda}{2}$
B.	6	$d = 2\lambda$
C.	4	$d = 2\lambda$
D.	4	$d = \frac{\lambda}{2}$

[1 mark]

Question 6

Monochromatic light of wavelength, 6λ is incident on a thin film of transparent plastic with a refractive index $1.5n$. The film is surrounded by air. The intensity of the light observed reflected off the film is a minimum. What is a possible thickness of the plastic?




- A. $\frac{\lambda}{n}$
- B. $\frac{\lambda}{3n}$
- C. $\frac{\lambda}{2n}$
- D. $\frac{12\lambda}{n}$

[1 mark]

Question 7

Red light is incident on a diffraction grating, a double-slit and a single-slit. The patterns produced on a screen some distance away are shown below.



Which row in the table correctly identifies patterns p, q and r?

	p	q	r
A.	Diffraction Grating	Double Slit	Single Slit
B.	Double Slit	Single Slit	Diffraction Grating
C.	Single Slit	Double Slit	Diffraction Grating
D.	Diffraction Grating	Single Slit	Double Slit

[1 mark]

Question 8

Which of the following statements about thin film interference are correct?

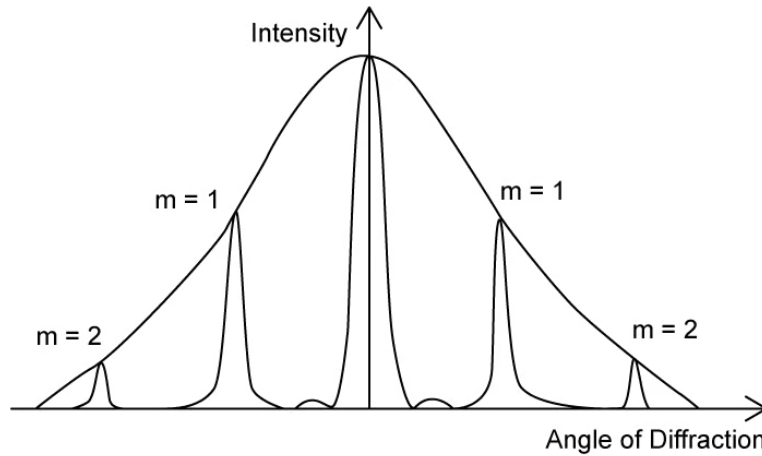
- I. A phase change occurs at a boundary between a more dense and a less dense material
- II. A phase change always involves some reflection and transmission
- III. The wavelength of a wave transmitted between materials of different densities stays the same
- IV. Light in a thin film travels a distance of two times the thickness of the film when it enters and leaves the film at the same surface to undergo destructive interference

- A. I, II and III
- B. I and II only
- C. II only
- D. IV only

[1 mark]

Question 9

The graph shows the variation with diffraction angle of the intensity of light when monochromatic light is incident on a diffraction grating.



The number of slits is reduced to less than 20. The width and the separation of the slits remain the same.

Three possible changes to the pattern are:

- I. The intensity of the primary maxima increases
- II. The width of the primary maxima increases
- III. Secondary maxima are seen between the primary maxima

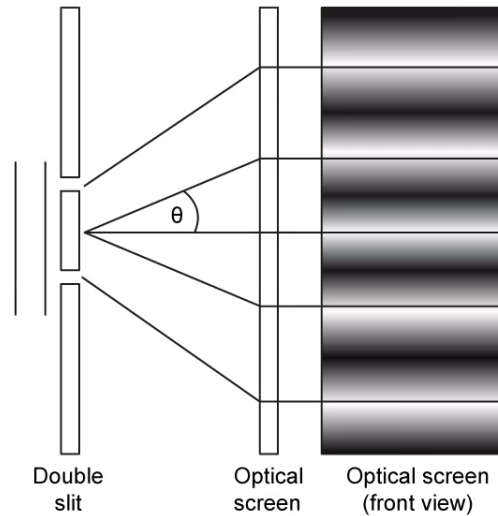
Which of the possible changes are correct?

- A. I and II only
- B. I and III only
- C. II and III only
- D. I, II and III only

[1 mark]

Question 10

A beam of monochromatic light is incident normally on a double slit. The slit spacing is d . The angles between the different orders are shown on the diagram.



What is the expression for the wavelength of light used?

- A. $\lambda = sD$
- B. $\lambda = s\theta$
- C. $\lambda = \theta D$
- D. $\lambda = \theta d$

[1 mark]