

# 3.10 Graph Theory

## Question Paper

Course	DPIB Maths
Section	3. Geometry & Trigonometry
Topic	3.10 Graph Theory
Difficulty	Medium

**Time allowed:** 80  
**Score:** /66  
**Percentage:** /100

### Question 1a

Let  $G$  be an unweighted graph with 5 vertices. The adjacency matrix of  $G$  is shown below.

	A	B	C	D	E
A	0	1	0	0	1
B	1	0	2	0	2
C	0	2	0	1	1
D	0	0	1	2	1
E	1	2	1	1	0

- (a)  
Draw the graph of  $G$ .

[3 marks]

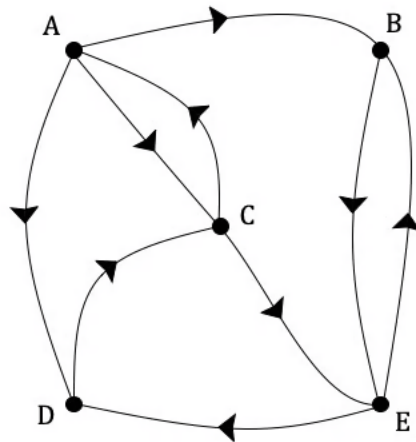
### Question 1b

- (b)  
(i)  
Define an Eulerian trail.  
(ii)  
From which vertices in graph  $G$  must an Eulerian trail start and finish. Give a reason for your answer.  
(iii)  
Write down an Eulerian trail in  $G$ .

[4 marks]

**Question 2a**

The graph  $G$  shown below is a strongly connected, unweighted, directed graph with 5 vertices.



(a)  
Explain why the graph is considered to be strongly connected.

[1 mark]

**Question 2b**

(b)  
Write down the adjacency matrix  $M$  for the graph  $G$ .

[3 marks]

### Question 2c

(c)

Find the total number of walks of length 5 that both start and finish at vertex A.

[2 marks]

### Question 2d

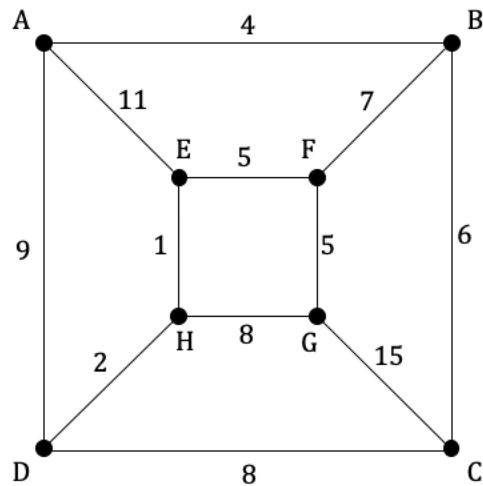
(d)

Write down a possible walk of length 5 that starts and finishes at vertex A.

[1 mark]

### Question 3a

Consider the weighted graph  $G$  below.



(a)

(i)

Define a Hamiltonian cycle.

(ii)

Write down a Hamiltonian cycle starting from vertex A.

[2 marks]

**Question 3b**

(b)

Use Kruskal's algorithm to find the minimum spanning tree. Show each step of the algorithm clearly.

**[3 marks]****Question 3c**

(c)

State the total weight of the minimum spanning tree.

**[1 mark]**

### Question 4a

Celeste is building a model city incorporating 6 main buildings that need to be connected to an electrical supply.

Each vertex listed in the table below represents a building and the weighting of each edge is the cost in USD of creating a link to the electrical supply between the given vertices.

	A	B	C	D	E	F
A	-	4	9	8	11	3
B	4	-	13	2	5	12
C	9	13	-	7	1	4
D	8	2	7	-	10	3
E	11	5	1	10	-	15
F	3	12	4	3	15	-

Celeste wants to find the lowest cost solution that links all 6 buildings up to the electricity supply.

a)

Starting from vertex **A**, use Prim's algorithm on the table to find and draw the minimum spanning tree. Show each step of the process clearly.

**[5 marks]**

### Question 4b

(b)

State the lowest cost of connecting all of the buildings to the electricity supply.

[1 mark]

**Question 5a**

5 scientists each have their own laboratory, and each laboratory is connected to other laboratories by a series of doors. Some of the doors can only be opened from one side. The table below lists which other laboratories can be accessed from the laboratory in the heading.

Anne's lab	Bilal's lab	Cariad's lab	Diego's lab	Ebele's lab
Cariad	Anne	Anne	Anne	Anne
	Cariad		Bilal	Cariad
	Diego		Ebele	Diego
	Ebele			

(a)

Show the information from the table in a directed graph.

[3 marks]

**Question 5b**

(b)

Show that it is possible to move through the laboratories visiting each laboratory exactly once, and write down a viable path.

[2 marks]

**Question 5c**

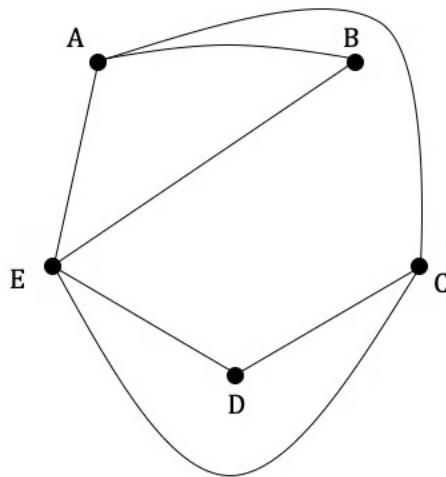
(c)

Comment on any restrictions that determine the start and finish points of a path that visits each laboratory exactly once.

[2 marks]

**Question 6a**

Let  $G$  be the graph below.



- (a)  
Construct the transition matrix for a random walk around  $G$ .

[3 marks]

**Question 6b**

- (b)  
Determine the probability that a random walk of length 3 starting at A will finish at C.

[2 marks]



**Question 6c**

(c)

(i)

Find the steady state probabilities for the graph.

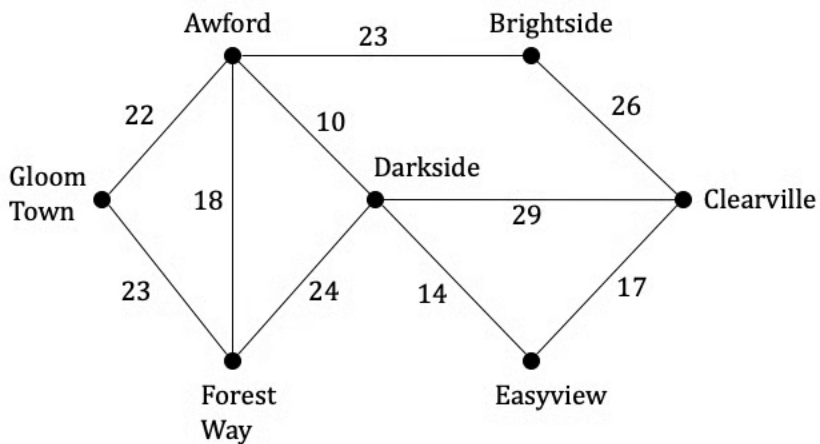
(ii)

Hence rank the vertices in terms of importance from highest to lowest.

[2 marks]

**Question 7a**

The graph  $G$  below shows 7 towns and the train tracks that connect them, with the vertices representing the towns and the weighting of each edge indicating the time taken in minutes to walk along the section of track.



(a)

State the degree of each vertex.

[2 marks]

**Question 7b**

(b)

Explain why  $G$  does not contain an Eulerian circuit.**[1 mark]****Question 7c**

The railway company in charge of maintaining the track wishes to inspect all sections of the track for defects after a storm event.

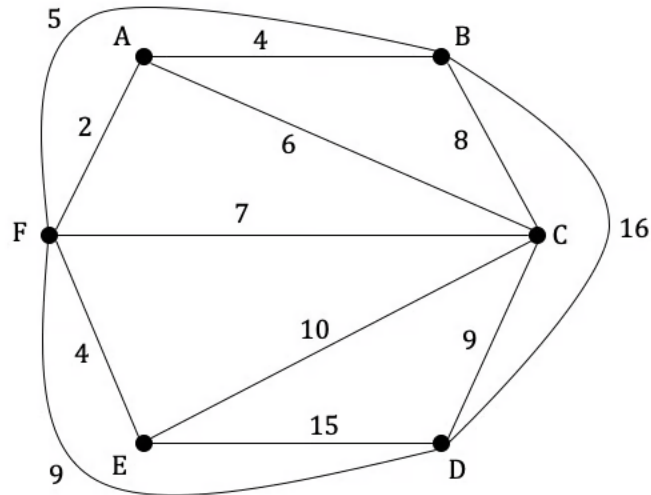
(c)

Find the minimum time it would take for a railway worker who was walking to inspect all of the track.

**[4 marks]**

### Question 8a

The graph below contains 6 vertices representing villages and their connecting bus routes. The weighting indicates the cost of each bus route in AUD.



(a)  
Explain why G is not a complete graph.

[1 mark]

### Question 8b

(b)  
Complete the table of least weights below.

	A	B	C	D	E	F
A	-					
B	4	-				
C	6	8	-			
D		9	9	-		
E			10	15	-	
F	2	5	7	9	4	-

[4 marks]

**Question 8c**

(c)

Starting at town **A**, use the nearest neighbour algorithm to find an upper bound for the cost of a journey that will visit each vertex and return to **A**. Be sure to include the precise route of the upper bound journey.

**[5 marks]**

**Question 9a**

The table of least weight for a graph  $G$  of 5 vertices is shown below. Each vertex listed in the table represents a room in an art gallery and the weighting of the graph denotes the distance in metres between the rooms.

	A	B	C	D	E
A	-	15	22	18	25
B	15	-	13	17	24
C	22	13	-	30	12
D	18	17	30	-	21
E	25	24	12	21	-

(a)  
Draw the graph  $G$ .

[3 marks]

**Question 9b**

(b)  
By deleting vertex E and using Prim's algorithm, find a lower bound for the distance walked to visit every room in the art gallery. Show each step of the process clearly.

[4 marks]

**Question 9c**

(c)  
Show that by deleting a different vertex a lower bound can be found that is higher than the one found in part (b).

**[2 marks]**