



22116110



International Baccalaureate®
Baccalauréat International
Bachillerato Internacional

**CHEMISTRY
STANDARD LEVEL
PAPER 1**

Monday 9 May 2011 (afternoon)

45 minutes

INSTRUCTIONS TO CANDIDATES

- Do not open this examination paper until instructed to do so.
- Answer all the questions.
- For each question, choose the answer you consider to be the best and indicate your choice on the answer sheet provided.
- The periodic table is provided for reference on page 2 of this examination paper.

The Periodic Table

1 2 3 4 5 6 7 0

1		2		3		4		5		6		7		0			
Atomic number		Atomic number		Atomic number		Atomic number		Atomic number		Atomic number		Atomic number		Atomic number			
Element		Element		Element		Element		Element		Element		Element		Element			
Relative atomic mass		Relative atomic mass		Relative atomic mass		Relative atomic mass		Relative atomic mass		Relative atomic mass		Relative atomic mass		Relative atomic mass			
1 H 1.01	2 He 4.00	3 Li 6.94	4 Be 9.01	5 B 10.81	6 C 12.01	7 N 14.01	8 O 16.00	9 F 19.00	10 Ne 20.18	11 Na 22.99	12 Mg 24.31	13 Al 26.98	14 Si 28.09	15 P 30.97	16 S 32.06	17 Cl 35.45	18 Ar 39.95
19 K 39.10	20 Ca 40.08	21 Sc 44.96	22 Ti 47.90	23 V 50.94	24 Cr 52.00	25 Mn 54.94	26 Fe 55.85	27 Co 58.93	28 Ni 58.71	29 Cu 63.55	30 Zn 65.37	31 Ga 69.72	32 Ge 72.59	33 As 74.92	34 Se 78.96	35 Br 79.90	36 Kr 83.80
37 Rb 85.47	38 Sr 87.62	39 Y 88.91	40 Zr 91.22	41 Nb 92.91	42 Mo 95.94	43 Tc 98.91	44 Ru 101.07	45 Rh 102.91	46 Pd 106.42	47 Ag 107.87	48 Cd 112.40	49 In 114.82	50 Sn 118.69	51 Sb 121.75	52 Te 127.60	53 I 126.90	54 Xe 131.30
55 Cs 132.91	56 Ba 137.34	57 [†] La 138.91	72 Hf 178.49	73 Ta 180.95	74 W 183.85	75 Re 186.21	76 Os 190.21	77 Ir 192.22	78 Pt 195.09	79 Au 196.97	80 Hg 200.59	81 Tl 204.37	82 Pb 207.19	83 Bi 208.98	84 Po (210)	85 At (210)	86 Rn (222)
87 Fr (223)	88 Ra (226)	89 [‡] Ac (227)															

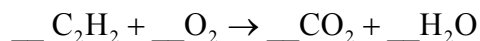
58 Ce 140.12	59 Pr 140.91	60 Nd 144.24	61 Pm 146.92	62 Sm 150.35	63 Eu 151.96	64 Gd 157.25	65 Tb 158.92	66 Dy 162.50	67 Ho 164.93	68 Er 167.26	69 Tm 168.93	70 Yb 173.04	71 Lu 174.97
---------------------------	---------------------------	---------------------------	---------------------------	---------------------------	---------------------------	---------------------------	---------------------------	---------------------------	---------------------------	---------------------------	---------------------------	---------------------------	---------------------------

†

90 Th 232.04	91 Pa 231.04	92 U 238.03	93 Np (237)	94 Pu (242)	95 Am (243)	96 Cm (247)	97 Bk (247)	98 Cf (251)	99 Es (254)	100 Fm (257)	101 Md (258)	102 No (259)	103 Lr (260)
---------------------------	---------------------------	--------------------------	--------------------------	--------------------------	--------------------------	--------------------------	--------------------------	--------------------------	--------------------------	---------------------------	---------------------------	---------------------------	---------------------------

‡

1. What is the sum of all coefficients when the following equation is balanced using the smallest possible whole numbers?



- A. 5
- B. 7
- C. 11
- D. 13
2. 1.7 g of NaNO_3 ($M_r = 85$) is dissolved in water to prepare 0.20 dm^3 of solution. What is the concentration of the resulting solution in mol dm^{-3} ?
- A. 0.01
- B. 0.1
- C. 0.2
- D. 1.0
3. How many molecules are present in a drop of ethanol, $\text{C}_2\text{H}_5\text{OH}$, of mass $2.3 \times 10^{-3} \text{ g}$? ($L = 6.0 \times 10^{23} \text{ mol}^{-1}$)
- A. 3.0×10^{19}
- B. 3.0×10^{20}
- C. 6.0×10^{20}
- D. 6.0×10^{26}

4. Which sample has the greatest mass?
- A. 1 mol of SO_2
 - B. 2 mol of N_2O
 - C. 2 mol of Ar
 - D. 4 mol of NH_3
5. The relative molecular mass of a gas is 56 and its empirical formula is CH_2 . What is the molecular formula of the gas?
- A. CH_2
 - B. C_2H_4
 - C. C_3H_6
 - D. C_4H_8
6. Which statement about the numbers of protons, electrons and neutrons in an atom is always correct?
- A. The number of neutrons minus the number of electrons is zero.
 - B. The number of protons plus the number of neutrons equals the number of electrons.
 - C. The number of protons equals the number of electrons.
 - D. The number of neutrons equals the number of protons.
7. Which property generally **decreases** across period 3?
- A. Atomic number
 - B. Electronegativity
 - C. Atomic radius
 - D. First ionization energy

8. Which property **increases** down group 1?
- A. First ionization energy
 - B. Melting point
 - C. Reactivity
 - D. Electronegativity
9. What is the correct Lewis structure for hypochlorous acid, a compound containing chlorine, hydrogen and oxygen?
- A. $\begin{array}{c} \ddot{\text{Cl}} : \ddot{\text{O}} : \text{H} : \\ \ddot{\quad} \quad \ddot{\quad} \end{array}$
 - B. $\begin{array}{c} \ddot{\text{Cl}} : \text{H} : \ddot{\text{O}} : \\ \ddot{\quad} \quad \quad \ddot{\quad} \end{array}$
 - C. $\begin{array}{c} \ddot{\text{Cl}} : \ddot{\text{O}} : \text{H} \\ \ddot{\quad} \quad \ddot{\quad} \end{array}$
 - D. $\begin{array}{c} \ddot{\text{O}} : \ddot{\text{Cl}} : \text{H} \\ \ddot{\quad} \quad \ddot{\quad} \end{array}$
10. Which compound forms hydrogen bonds in the liquid state?
- A. $\text{C}_2\text{H}_5\text{OH}$
 - B. CHCl_3
 - C. CH_3CHO
 - D. $(\text{CH}_3\text{CH}_2)_3\text{N}$

11. How do the bond angles in CH_4 , NH_3 and H_2O compare?

- A. $\text{CH}_4 = \text{NH}_3 = \text{H}_2\text{O}$
- B. $\text{CH}_4 < \text{NH}_3 < \text{H}_2\text{O}$
- C. $\text{NH}_3 < \text{CH}_4 < \text{H}_2\text{O}$
- D. $\text{H}_2\text{O} < \text{NH}_3 < \text{CH}_4$

12. Which combination of the characteristics of element X, a metal, and element Y, a non metal, is most likely to lead to ionic bonding?

	X	Y
A.	low ionization energy	high electronegativity value
B.	low ionization energy	low electronegativity value
C.	high ionization energy	high electronegativity value
D.	high ionization energy	low electronegativity value

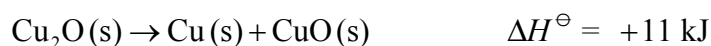
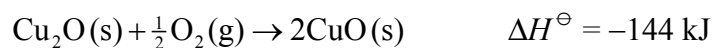
13. Which particles are responsible for electrical conductivity in metals?

- A. Anions
- B. Cations
- C. Electrons
- D. Protons

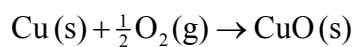
14. When 100 cm^3 of 1.0 mol dm^{-3} HCl is mixed with 100 cm^3 of 1.0 mol dm^{-3} NaOH, the temperature of the resulting solution increases by 5.0°C . What will be the temperature change, in $^\circ\text{C}$, when 50 cm^3 of these two solutions are mixed?
- A. 2.5
B. 5.0
C. 10
D. 20

15. Which statement about bonding is correct?
- A. Bond breaking is endothermic and requires energy.
B. Bond breaking is endothermic and releases energy.
C. Bond making is exothermic and requires energy.
D. Bond making is endothermic and releases energy.

16. Consider the following reactions.



What is the value of ΔH^\ominus , in kJ, for this reaction?

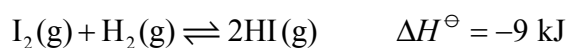


- A. $-144 + 11$
B. $+144 - 11$
C. $-144 - 11$
D. $+144 + 11$

17. Which statements describe the action of a catalyst?

- I. It does **not** alter the ΔH for a reaction.
 - II. It increases the E_a for the reaction.
 - III. It alters the mechanism (pathway) of a reaction.
- A. I and II only
 - B. I and III only
 - C. II and III only
 - D. I, II and III

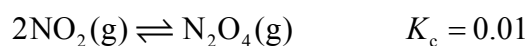
18. Consider the reaction between gaseous iodine and gaseous hydrogen.



Why do some collisions between iodine and hydrogen **not** result in the formation of the product?

- A. The I_2 and H_2 molecules do not have sufficient energy.
- B. The system is in equilibrium.
- C. The temperature of the system is too high.
- D. The activation energy for this reaction is very low.

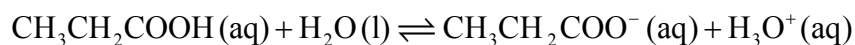
19. The equilibrium between nitrogen dioxide, NO_2 , and dinitrogen tetroxide, N_2O_4 , is shown below.



What happens when the volume of a mixture at equilibrium is decreased at a constant temperature?

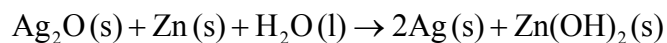
- I. The value of K_c increases
 - II. More N_2O_4 is formed
 - III. The ratio of $\frac{[\text{NO}_2]}{[\text{N}_2\text{O}_4]}$ decreases
- A. I and II only
 - B. I and III only
 - C. II and III only
 - D. I, II and III
20. Which statement about chemical equilibria implies they are dynamic?
- A. The position of equilibrium constantly changes.
 - B. The rates of forward and backward reactions change.
 - C. The reactants and products continue to react.
 - D. The concentrations of the reactants and products continue to change.
21. Which statement explains why ammonia can act as a Lewis base?
- A. Ammonia can donate a lone pair of electrons.
 - B. Ammonia can accept a lone pair of electrons.
 - C. Ammonia can donate a proton.
 - D. Ammonia can accept a proton.

22. Consider the equilibrium below.



Which species represent a conjugate acid-base pair?

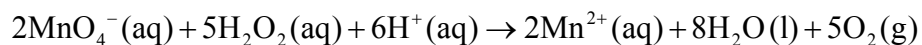
- A. $\text{CH}_3\text{CH}_2\text{COOH}$ and H_2O
 - B. H_2O and $\text{CH}_3\text{CH}_2\text{COO}^-$
 - C. H_3O^+ and H_2O
 - D. $\text{CH}_3\text{CH}_2\text{COO}^-$ and H_3O^+
23. Which species could be reduced to form NO_2 ?
- A. N_2O
 - B. NO_3^-
 - C. HNO_2
 - D. NO
24. Consider the overall reaction taking place in a voltaic cell.



What is the role of zinc in the cell?

- A. The positive electrode and the oxidizing agent.
- B. The positive electrode and the reducing agent.
- C. The negative electrode and the oxidizing agent.
- D. The negative electrode and the reducing agent.

25. What happens to the manganese in the following reaction?



- A. It is oxidized and its oxidation number increases.
- B. It is oxidized and its oxidation number decreases.
- C. It is reduced and its oxidation number increases.
- D. It is reduced and its oxidation number decreases.
26. Which of the following statements about alkenes is **not** correct?
- A. They have reactive double bonds.
- B. They can form addition polymers.
- C. They react mainly by substitution.
- D. They can react with water to form alcohols.
27. What is the type of mechanism and an important feature of the reaction between $\text{C}(\text{CH}_3)_3\text{Br}$ and aqueous NaOH ?

	Mechanism	Feature
A.	$\text{S}_{\text{N}}1$	a transition state
B.	$\text{S}_{\text{N}}1$	an intermediate
C.	$\text{S}_{\text{N}}2$	a transition state
D.	$\text{S}_{\text{N}}2$	an intermediate

28. Which of the following are isomers of pentane?
- I. 2-methylpentane
 - II. methylbutane
 - III. dimethylpropane
- A. I and II only
 - B. I and III only
 - C. II and III only
 - D. I, II and III
29. Which of the following pairs are members of the same homologous series?
- A. $\text{CH}_3\text{CH}_2\text{CH}_2\text{OH}$ and $\text{CH}_3\text{CH}_2\text{CHO}$
 - B. $\text{CH}_3\text{CH}(\text{OH})\text{CH}_3$ and $\text{CH}_3\text{CH}_2\text{CH}(\text{OH})\text{CH}_3$
 - C. CH_3COCH_3 and $\text{CH}_3\text{CH}_2\text{COOH}$
 - D. $\text{CH}_3\text{COCH}_2\text{CH}_3$ and $\text{CH}_3\text{CH}_2\text{CHO}$
30. A burette reading is recorded as $27.70 \pm 0.05 \text{ cm}^3$. Which of the following could be the actual value?
- I. 27.68 cm^3
 - II. 27.78 cm^3
 - III. 27.74 cm^3
- A. I and II only
 - B. I and III only
 - C. II and III only
 - D. I, II and III
-