

© International Baccalaureate Organization 2022

All rights reserved. No part of this product may be reproduced in any form or by any electronic or mechanical means, including information storage and retrieval systems, without the prior written permission from the IB. Additionally, the license tied with this product prohibits use of any selected files or extracts from this product. Use by third parties, including but not limited to publishers, private teachers, tutoring or study services, preparatory schools, vendors operating curriculum mapping services or teacher resource digital platforms and app developers, whether fee-covered or not, is prohibited and is a criminal offense.

More information on how to request written permission in the form of a license can be obtained from <https://ibo.org/become-an-ib-school/ib-publishing/licensing/applying-for-a-license/>.

© Organisation du Baccalauréat International 2022

Tous droits réservés. Aucune partie de ce produit ne peut être reproduite sous quelque forme ni par quelque moyen que ce soit, électronique ou mécanique, y compris des systèmes de stockage et de récupération d'informations, sans l'autorisation écrite préalable de l'IB. De plus, la licence associée à ce produit interdit toute utilisation de tout fichier ou extrait sélectionné dans ce produit. L'utilisation par des tiers, y compris, sans toutefois s'y limiter, des éditeurs, des professeurs particuliers, des services de tutorat ou d'aide aux études, des établissements de préparation à l'enseignement supérieur, des fournisseurs de services de planification des programmes d'études, des gestionnaires de plateformes pédagogiques en ligne, et des développeurs d'applications, moyennant paiement ou non, est interdite et constitue une infraction pénale.

Pour plus d'informations sur la procédure à suivre pour obtenir une autorisation écrite sous la forme d'une licence, rendez-vous à l'adresse <https://ibo.org/become-an-ib-school/ib-publishing/licensing/applying-for-a-license/>.

© Organización del Bachillerato Internacional, 2022

Todos los derechos reservados. No se podrá reproducir ninguna parte de este producto de ninguna forma ni por ningún medio electrónico o mecánico, incluidos los sistemas de almacenamiento y recuperación de información, sin la previa autorización por escrito del IB. Además, la licencia vinculada a este producto prohíbe el uso de todo archivo o fragmento seleccionado de este producto. El uso por parte de terceros —lo que incluye, a título enunciativo, editoriales, profesores particulares, servicios de apoyo académico o ayuda para el estudio, colegios preparatorios, desarrolladores de aplicaciones y entidades que presten servicios de planificación curricular u ofrezcan recursos para docentes mediante plataformas digitales—, ya sea incluido en tasas o no, está prohibido y constituye un delito.

En este enlace encontrará más información sobre cómo solicitar una autorización por escrito en forma de licencia: <https://ibo.org/become-an-ib-school/ib-publishing/licensing/applying-for-a-license/>.

Chemistry
Standard level
Paper 2

Wednesday 9 November 2022 (morning)

Candidate session number

--	--	--	--	--	--	--	--	--	--

1 hour 15 minutes

Instructions to candidates

- Write your session number in the boxes above.
- Do not open this examination paper until instructed to do so.
- Answer all questions.
- Answers must be written within the answer boxes provided.
- A calculator is required for this paper.
- A clean copy of the **chemistry data booklet** is required for this paper.
- The maximum mark for this examination paper is **[50 marks]**.



(Question 1 continued)

- (e) Cold packs contain ammonium nitrate and water separated by a membrane.
 - (i) The mass of the contents of the cold pack is 25.32 g and its initial temperature is 25.2 °C. Once the contents are mixed, the temperature drops to 0.8 °C.

Calculate the energy, in J, absorbed by the dissolution of ammonium nitrate in water within the cold pack. Assume the specific heat capacity of the solution is 4.18 Jg⁻¹ K⁻¹. Use section 1 of the data booklet.

[1]

.....

.....

.....

- (ii) The change in enthalpy when ammonium nitrate dissolves in water is 25.69 kJ mol⁻¹. Determine the mass of ammonium nitrate in the cold pack using your answer obtained in (e)(i) and section 6 of the data booklet.

If you did not obtain an answer in (e)(i), use 3.11 × 10³ J, although this is not the correct answer.

[2]

.....

.....

.....

.....

- (iii) The absolute uncertainty in mass of the contents of the cold pack is ±0.01 g and in each temperature reading is ±0.2 °C. Using your answer in (e)(ii), calculate the absolute uncertainty in the mass of ammonium nitrate in the cold pack.

If you did not obtain an answer in (e)(ii), use 6.55 g, although this is not the correct answer.

[3]

.....

.....

.....

.....

(This question continues on the following page)



(Question 1 continued)

- (iv) The cold pack contains 9.50 g of ammonium nitrate. Calculate the percentage error in the experimentally determined mass of ammonium nitrate obtained in (e)(ii).

If you did not obtain an answer in (e)(ii), use 6.55 g, although this is not the correct answer.

[1]

.....
.....
.....
.....

- (f) Solid ammonium nitrate can decompose to gaseous dinitrogen monoxide and liquid water.

(i) Write the chemical equation for this decomposition.

[1]

.....
.....

(ii) Calculate the volume of dinitrogen monoxide produced at STP when a 5.00 g sample of ammonium nitrate decomposes. Use section 2 of the data booklet.

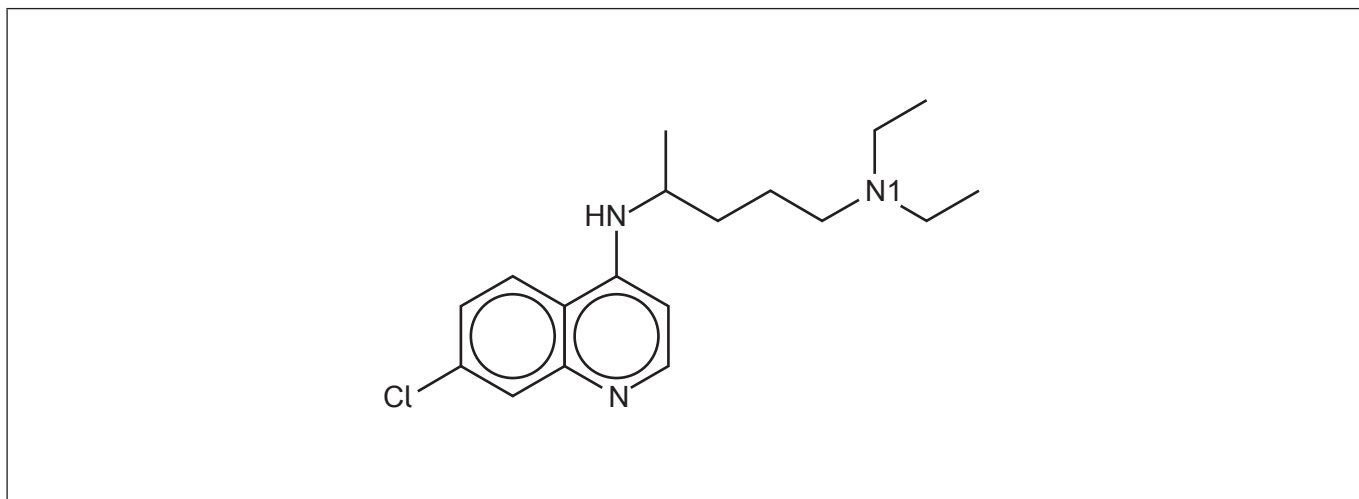
[2]

.....
.....
.....
.....
.....

(This question continues on the following page)



2. Chloroquine is a medication used to prevent and treat malaria.



(a) Draw a circle around the secondary amino group in chloroquine. [1]

(b) Determine the index of hydrogen deficiency, IHD, of chloroquine. [1]

.....
.....

(c) Compare, giving a reason, the length of the carbon-nitrogen bond in the ring to the length of the carbon-N1 bond. [1]

.....
.....

(d) State, giving a reason, whether carbon or nitrogen is the most electronegative element. [1]

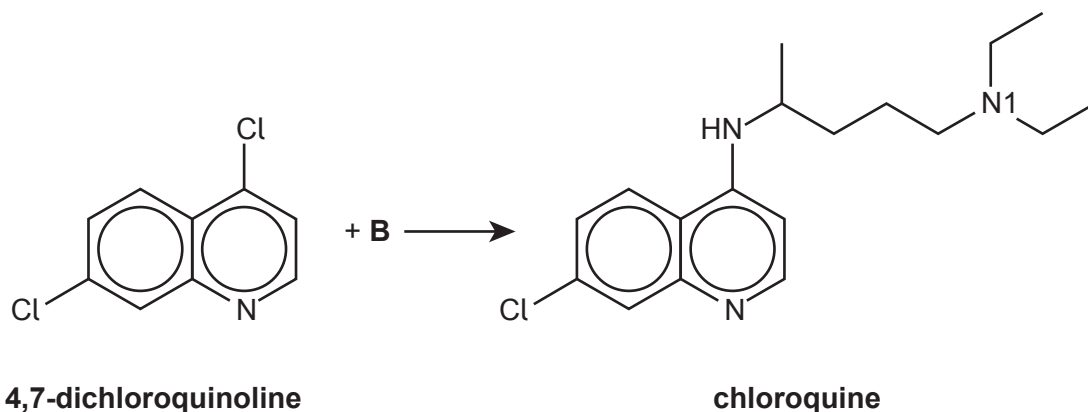
.....
.....

(This question continues on the following page)



(Question 2 continued)

(e) Chloroquine can be synthesized by reacting 4,7-dichloroquinoline with another reactant, **B**.



(i) Deduce the structure of **B**.

[2]

(ii) This reaction can be done with a copper catalyst. State the ground-state electron configuration for copper.

[1]

.....

.....

(This question continues on page 9)



Please **do not** write on this page.

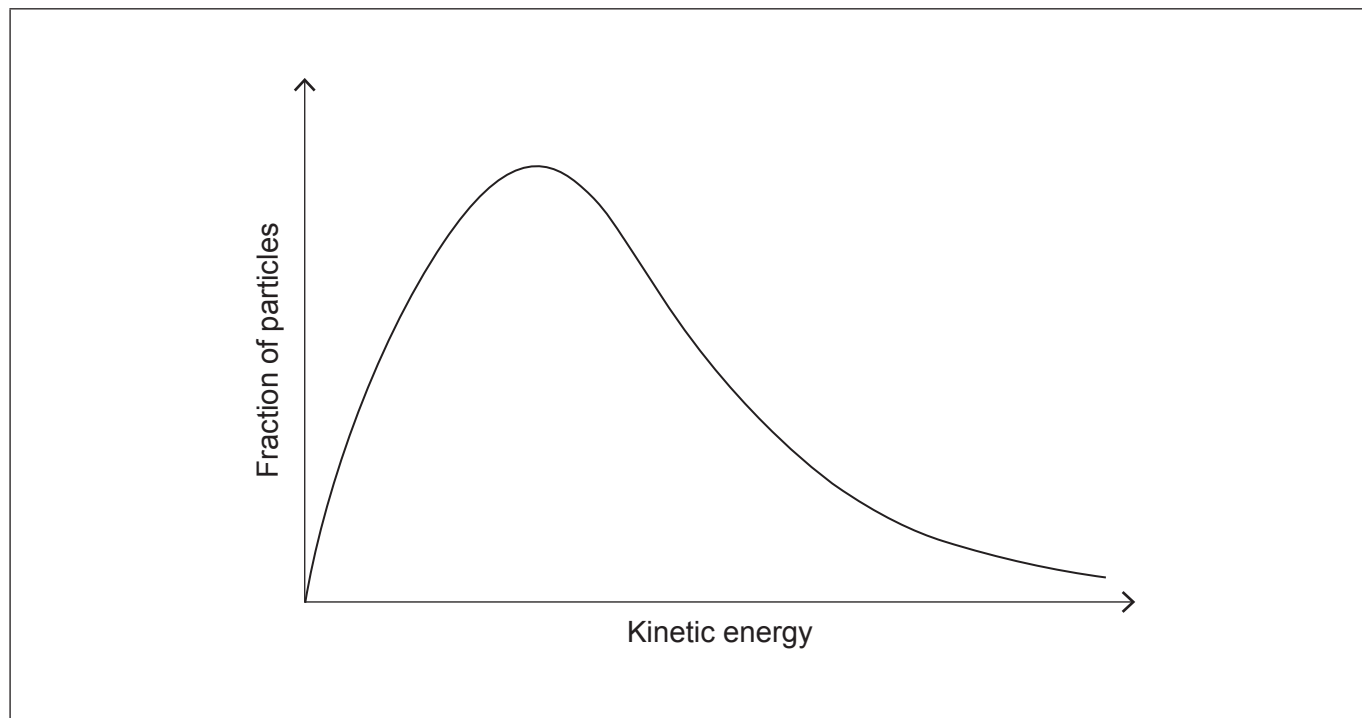
Answers written on this page
will not be marked.



(Question 2 continued)

(iii) Annotate the Maxwell-Boltzmann distribution curve showing the activation energies, E_a , for the catalysed and uncatalysed reactions.

[1]



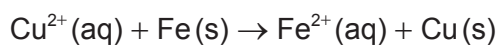
(iv) Explain, referring to the Maxwell-Boltzmann distribution curve, the effect of a catalyst on a chemical reaction.

[1]

.....
.....
.....



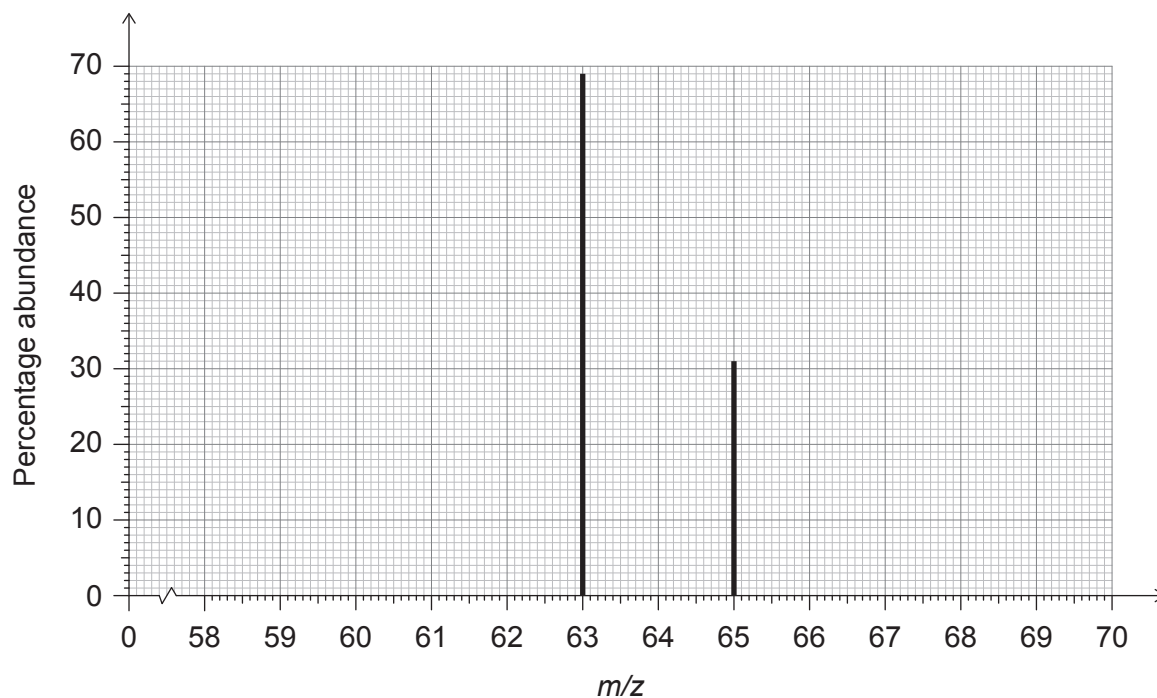
3. Consider the following reaction:



(a) State the ground-state electron configuration for Fe^{2+} . [1]

.....
.....

(b) The mass spectrum for copper is shown:



Show how a relative atomic mass of copper of 63.62 can be obtained from this mass spectrum.

[1]

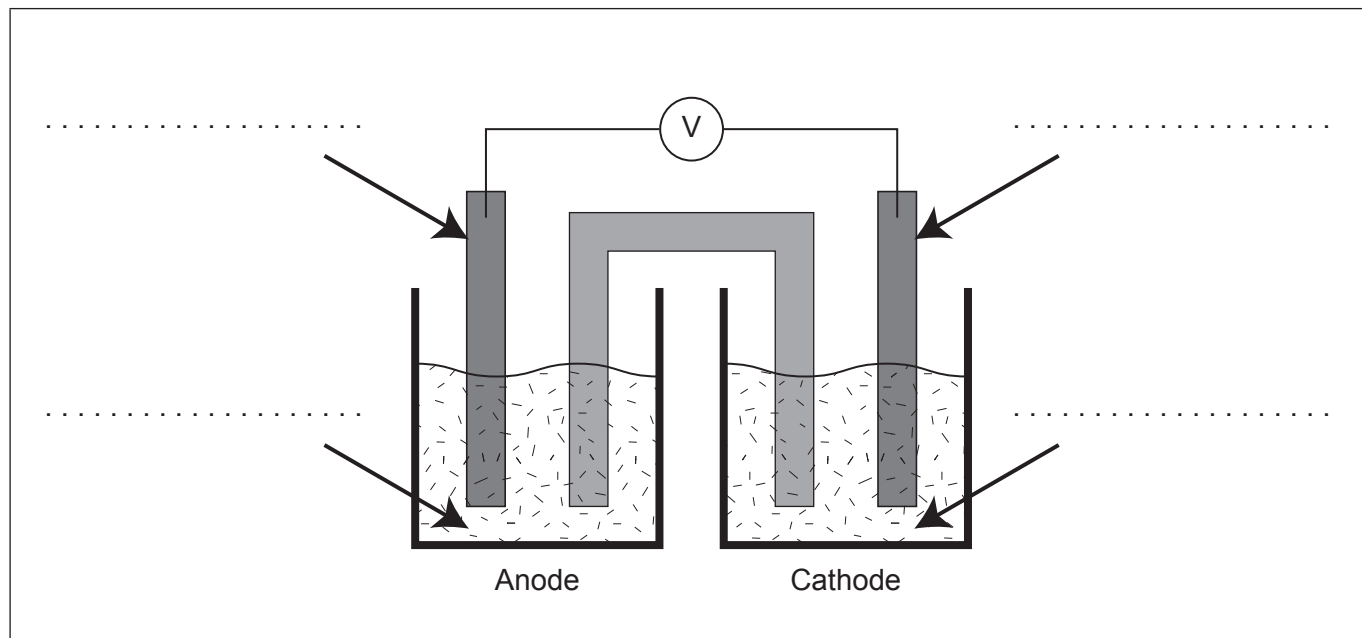
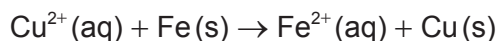
.....
.....
.....

(This question continues on the following page)



(Question 3 continued)

(c) The diagram shows an unlabelled voltaic cell for the reaction:



- (i) Label the diagram with the species from the equation and the direction of electron flow. [2]
- (ii) Write the half-equation for the reaction occurring at the anode (negative electrode). [1]

.....

.....

- (iii) The diagram includes a salt bridge that is filled with a saturated solution of KNO_3 . Outline the function of the salt bridge. [1]

.....

.....

(This question continues on page 13)



Please **do not** write on this page.

Answers written on this page
will not be marked.



(Question 3 continued)

(iv) Predict the movement of **all** ionic species through the salt bridge.

[2]

.....

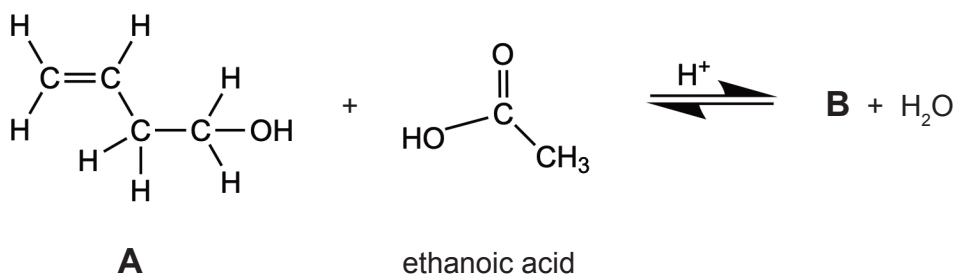
.....

.....

.....



4. An organic compound, **A**, reacts with ethanoic acid to produce **B** using concentrated sulfuric acid as a catalyst.



- (a) (i) Deduce the structural and empirical formulas of **B**. [3]

Structural formula:

Empirical formula:

- (ii) Explain, with reference to Le Châtelier's principle, the effect of using dilute rather than concentrated sulfuric acid as the catalyst on the yield of the reaction. [2]

.....

.....

.....

.....

(This question continues on the following page)



(Question 4 continued)

(iii) Explain, with reference to intermolecular forces, why **B** is more volatile than **A**. [2]

.....

.....

.....

.....

.....

(b) Compound **A** can also react with bromine. Describe the change observed if **A** is reacted with bromine. [1]

.....

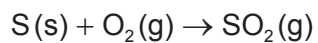
.....



5. Lignite, a type of coal, contains about 0.40% sulfur by mass.

(a) Calculate the amount, in mol, of sulfur dioxide produced when 500.0 g of lignite undergoes combustion.

[2]



.....

.....

.....

.....

.....

(b) Write an equation that shows how sulfur dioxide can produce acid rain.

[1]

.....

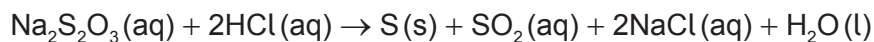
.....

(This question continues on the following page)

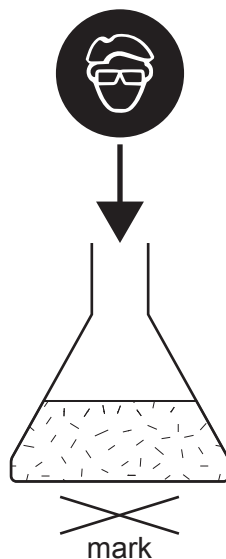


(Question 5 continued)

(c) Sodium thiosulfate reacts with hydrochloric acid as shown:



The precipitate of sulfur makes the mixture cloudy, so a mark underneath the reaction mixture becomes invisible with time.



Suggest **two** variables, other than concentration, that should be controlled when comparing relative rates at different temperatures.

[2]

.....

.....

.....

.....

(d) Discuss **two** different ways to reduce the environmental impact of energy production from coal.

[2]

.....

.....

.....

.....



Disclaimer:

Content used in IB assessments is taken from authentic, third-party sources. The views expressed within them belong to their individual authors and/or publishers and do not necessarily reflect the views of the IB.

References:

- 3.(b)** WebElements, n.d. *Copper: isotope data* [online] Available at: <https://www.webelements.com/copper/isotopes.html> [Accessed 6 October 2021].

All other texts, graphics and illustrations © International Baccalaureate Organization 2022



20EP18

Please **do not** write on this page.

Answers written on this page
will not be marked.



20EP19

Please **do not** write on this page.

Answers written on this page
will not be marked.



20EP20