

© International Baccalaureate Organization 2022

All rights reserved. No part of this product may be reproduced in any form or by any electronic or mechanical means, including information storage and retrieval systems, without the prior written permission from the IB. Additionally, the license tied with this product prohibits use of any selected files or extracts from this product. Use by third parties, including but not limited to publishers, private teachers, tutoring or study services, preparatory schools, vendors operating curriculum mapping services or teacher resource digital platforms and app developers, whether fee-covered or not, is prohibited and is a criminal offense.

More information on how to request written permission in the form of a license can be obtained from <https://ibo.org/become-an-ib-school/ib-publishing/licensing/applying-for-a-license/>.

© Organisation du Baccalauréat International 2022

Tous droits réservés. Aucune partie de ce produit ne peut être reproduite sous quelque forme ni par quelque moyen que ce soit, électronique ou mécanique, y compris des systèmes de stockage et de récupération d'informations, sans l'autorisation écrite préalable de l'IB. De plus, la licence associée à ce produit interdit toute utilisation de tout fichier ou extrait sélectionné dans ce produit. L'utilisation par des tiers, y compris, sans toutefois s'y limiter, des éditeurs, des professeurs particuliers, des services de tutorat ou d'aide aux études, des établissements de préparation à l'enseignement supérieur, des fournisseurs de services de planification des programmes d'études, des gestionnaires de plateformes pédagogiques en ligne, et des développeurs d'applications, moyennant paiement ou non, est interdite et constitue une infraction pénale.

Pour plus d'informations sur la procédure à suivre pour obtenir une autorisation écrite sous la forme d'une licence, rendez-vous à l'adresse <https://ibo.org/become-an-ib-school/ib-publishing/licensing/applying-for-a-license/>.

© Organización del Bachillerato Internacional, 2022

Todos los derechos reservados. No se podrá reproducir ninguna parte de este producto de ninguna forma ni por ningún medio electrónico o mecánico, incluidos los sistemas de almacenamiento y recuperación de información, sin la previa autorización por escrito del IB. Además, la licencia vinculada a este producto prohíbe el uso de todo archivo o fragmento seleccionado de este producto. El uso por parte de terceros —lo que incluye, a título enunciativo, editoriales, profesores particulares, servicios de apoyo académico o ayuda para el estudio, colegios preparatorios, desarrolladores de aplicaciones y entidades que presten servicios de planificación curricular u ofrezcan recursos para docentes mediante plataformas digitales—, ya sea incluido en tasas o no, está prohibido y constituye un delito.

En este enlace encontrará más información sobre cómo solicitar una autorización por escrito en forma de licencia: <https://ibo.org/become-an-ib-school/ib-publishing/licensing/applying-for-a-license/>.

Chemistry

Higher level

Paper 1

Wednesday 9 November 2022 (morning)

1 hour

Instructions to candidates

- Do not open this examination paper until instructed to do so.
- Answer all the questions.
- For each question, choose the answer you consider to be the best and indicate your choice on the answer sheet provided.
- The periodic table is provided for reference on page 2 of this examination paper.
- The maximum mark for this examination paper is **[40 marks]**.

1. How many oxygen atoms are present in 0.0500 mol $\text{Ba}(\text{OH})_2 \cdot 8\text{H}_2\text{O}$?

$$N_{\text{A}} = 6.02 \times 10^{23}$$

- A. 3.01×10^{23}
- B. 6.02×10^{23}
- C. 3.01×10^{24}
- D. 6.02×10^{24}
2. What is the change of state for a gas to a solid?
- A. Condensation
- B. Deposition
- C. Freezing
- D. Sublimation
3. How many moles of carbon dioxide are produced by the complete combustion of 7.0 g of ethene, $\text{C}_2\text{H}_4(\text{g})$?

$$M_{\text{r}} = 28$$

- A. 0.25
- B. 0.5
- C. 0.75
- D. 1.0

4. Successive ionization energies of an element, **X**, are shown.

	1st	2nd	3rd	4th
Ionization energy (kJ mol ⁻¹)	740	1450	7730	10 540

What energy, in kJ mol⁻¹, is required for element **X** to reach its most stable oxidation state in ionic compounds?

- A. 740
- B. 1450
- C. 2190
- D. 7730
5. Which quantities are different between two species represented by the notation $^{128}_{52}\text{Te}$ and $^{128}_{53}\text{I}$?
- A. The number of protons only
- B. The number of protons and electrons only
- C. The number of protons and neutrons only
- D. The number of protons, neutrons and electrons
6. Which best explains why complexes of d-block elements are coloured?
- A. Light is absorbed when electrons are promoted between d orbitals.
- B. Light is emitted when electrons are promoted between d orbitals.
- C. Light is absorbed when electrons return to lower energy d orbitals.
- D. Light is emitted when electrons return to lower energy d orbitals.

7. Which elements are considered to be metalloids?
- I. Gallium
 - II. Germanium
 - III. Arsenic
- A. I and II only
- B. I and III only
- C. II and III only
- D. I, II and III
8. Which property of elements increases down a group but decreases across a period?
- A. Atomic radius
- B. Electronegativity
- C. Ionic radius
- D. Ionization energy
9. Which molecule can be represented by resonance structures?
- A. H_2S
- B. HNO_3
- C. H_2O_2
- D. HClO
10. Which elements are capable of forming expanded octets?
- I. Nitrogen
 - II. Phosphorus
 - III. Arsenic
- A. I and II only
- B. I and III only
- C. II and III only
- D. I, II and III

11. Which molecule has a tetrahedral molecular geometry?
- A. HNO_3
 - B. SF_4
 - C. XeF_4
 - D. XeO_4
12. Alloying a metal with a metal of smaller atomic radius can disrupt the lattice and make it more difficult for atoms to slide over each other. Which property will increase as a result?
- A. Electrical conductivity
 - B. Ductility
 - C. Malleability
 - D. Strength

13. Chlorofluorocarbons (CFCs) contain bonds of the following lengths:

$$\text{C}-\text{C} = 1.54 \times 10^{-10} \text{ m}$$

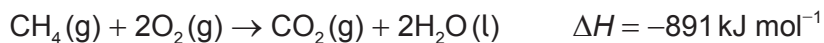
$$\text{C}-\text{F} = 1.38 \times 10^{-10} \text{ m}$$

$$\text{C}-\text{Cl} = 1.77 \times 10^{-10} \text{ m}$$

What is the order of **increasing** bond strength in the CFC molecule?

- A. $\text{C}-\text{C} < \text{C}-\text{F} < \text{C}-\text{Cl}$
- B. $\text{C}-\text{C} < \text{C}-\text{Cl} < \text{C}-\text{F}$
- C. $\text{C}-\text{Cl} < \text{C}-\text{C} < \text{C}-\text{F}$
- D. $\text{C}-\text{F} < \text{C}-\text{C} < \text{C}-\text{Cl}$

14. What is the value for enthalpy of formation of methane from the given enthalpies of combustion?

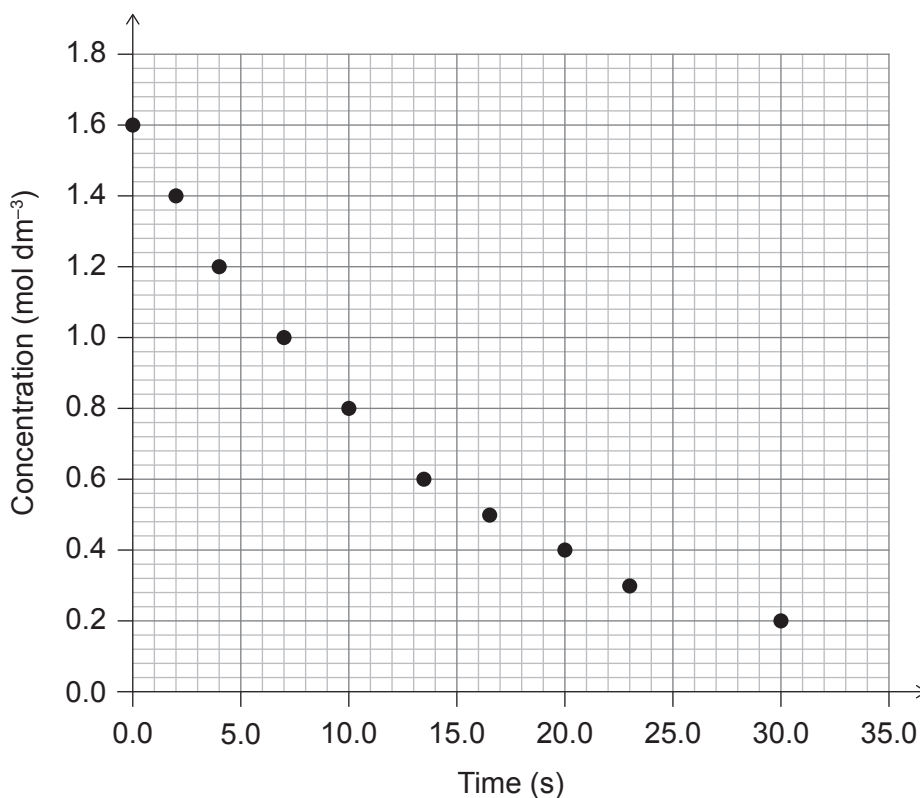


- A. $(-394 - 286 - 891) \text{ kJ mol}^{-1}$
 B. $(-394 - (2 \times 286) - 891) \text{ kJ mol}^{-1}$
 C. $(-394 - 286 + 891) \text{ kJ mol}^{-1}$
 D. $(-394 - (2 \times 286) + 891) \text{ kJ mol}^{-1}$
15. Which magnitudes of lattice enthalpy and hydration enthalpy of ions for an ionic substance would result in the most exothermic enthalpy of solution?

	Magnitude of lattice enthalpy	Magnitude of hydration enthalpy of ions
A.	large	large
B.	large	small
C.	small	large
D.	small	small

16. Which alkane has the lowest standard entropy, S^\ominus ?
- A. $\text{CH}_4(\text{g})$
 B. $\text{C}_2\text{H}_6(\text{g})$
 C. $\text{C}_3\text{H}_8(\text{g})$
 D. $\text{C}_4\text{H}_{10}(\text{g})$
17. At which temperature could ΔH , ΔS , and ΔG all be positive?
- A. High temperatures
 B. Low temperatures
 C. Any temperature
 D. No temperature

18. What initial rate of reaction can be determined from the graph?



- A. $0.1 \text{ mol dm}^{-3} \text{ s}^{-1}$
- B. $0.2 \text{ mol dm}^{-3} \text{ s}^{-1}$
- C. $1.0 \text{ mol dm}^{-3} \text{ s}^{-1}$
- D. $1.6 \text{ mol dm}^{-3} \text{ s}^{-1}$

19. Which changes would increase the rate of an exothermic reaction?

	Temperature	Particle size
A.	Increase	Decrease
B.	Increase	Increase
C.	Decrease	Increase
D.	Decrease	Decrease

20. Data is given for the reaction $2X_2(g) + Y_2(g) \rightarrow 2X_2Y(g)$.

$[X_2(g)]$ (mol dm ⁻³)	$[Y_2(g)]$ (mol dm ⁻³)	Rate (mol dm ⁻³ min ⁻¹)
0.1	0.2	0.1
0.2	0.2	0.4
0.2	0.1	0.4

What rate equation can be inferred from the data?

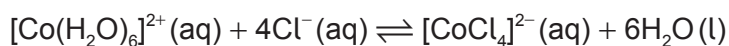
- A. Rate = $k [X_2] [Y_2]$
- B. Rate = $k [X_2]^2 [Y_2]$
- C. Rate = $k [X_2]^2 [Y_2]^0$
- D. Rate = $k [X_2]^2 [Y_2]^2$
21. The activation energy of a reaction can be obtained from the rate constant, k , and the absolute temperature, T . Which graph of these quantities produces a straight line?
- A. k against T
- B. k against $\frac{1}{T}$
- C. $\ln k$ against T
- D. $\ln k$ against $\frac{1}{T}$
22. For the reaction $I_2(g) + 3Cl_2(g) \rightleftharpoons 2ICl_3(g)$ at a certain temperature, the equilibrium concentrations are (in mol dm⁻³):

$$[I_2] = 0.20, [Cl_2] = 0.20, [ICl_3] = 2.0$$

What is the value of K_c ?

- A. 0.25
- B. 50
- C. 2500
- D. 5000

23. Which of these changes would shift the equilibrium to the right?



- I. Addition of 0.01 M HCl
- II. Addition of concentrated HCl
- III. Evaporation of water

- A. I and II only
- B. I and III only
- C. II and III only
- D. I, II and III

24. Equal volumes of 0.10 mol dm^{-3} weak acid and strong acid are titrated with 0.10 mol dm^{-3} NaOH solution. Which of these is the same for the two acids?

- A. Initial pH
- B. Heat evolved in the neutralization
- C. Volume of NaOH for complete neutralization
- D. Initial electrical conductivity

25. Which species has the weakest conjugate base?

- A. HCl
- B. NH_4^{+}
- C. HCO_3^{-}
- D. H_2O

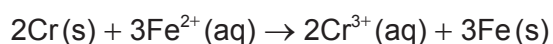
26. Which solutions will form a buffer when mixed?

- A. 50 cm^3 of 1.0 mol dm^{-3} HCl and 50 cm^3 of 1.0 mol dm^{-3} NaOH
- B. 50 cm^3 of 1.0 mol dm^{-3} CH_3COOH and 50 cm^3 of 1.0 mol dm^{-3} NaOH
- C. 50 cm^3 of 1.0 mol dm^{-3} CH_3COOH and 100 cm^3 of 1.0 mol dm^{-3} NaOH
- D. 100 cm^3 of 1.0 mol dm^{-3} CH_3COOH and 50 cm^3 of 1.0 mol dm^{-3} NaOH

27. Which species can act both as a Lewis acid and a Lewis base?

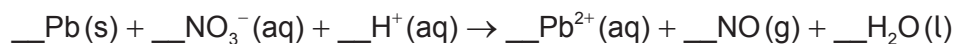
- A. H_2O
- B. NH_4^+
- C. Cu^{2+}
- D. CH_4

28. What occurs during the operation of a voltaic cell based on the given reaction?



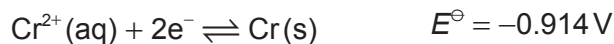
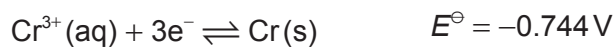
	External circuit	Ion movement in solution
A.	Electrons move from Cr to Fe	$\text{Fe}^{2+}(\text{aq})$ move away from Fe(s)
B.	Electrons move from Cr to Fe	$\text{Fe}^{2+}(\text{aq})$ move toward Fe(s)
C.	Electrons move from Fe to Cr	$\text{Cr}^{3+}(\text{aq})$ move away from Cr(s)
D.	Electrons move from Fe to Cr	$\text{Cr}^{3+}(\text{aq})$ move toward Cr(s)

29. What is the coefficient for H^+ when the equation below is balanced?



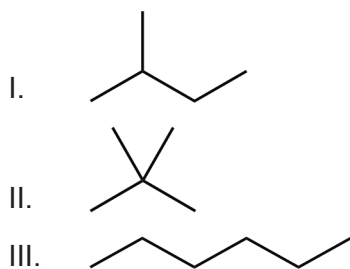
- A. 2
- B. 4
- C. 6
- D. 8

30. The standard electrode potentials for three half-cells involving chromium are shown.



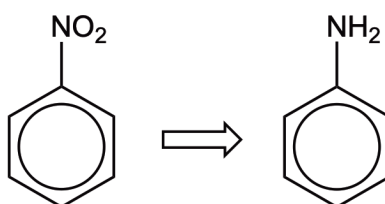
Which statement is correct?

- A. $\text{Cr}^{3+}(\text{aq})$ can oxidize $\text{Cr}^{2+}(\text{aq})$ but not $\text{Cr}(\text{s})$.
 - B. $\text{Cr}^{3+}(\text{aq})$ can oxidize $\text{Cr}(\text{s})$ but not $\text{Cr}^{2+}(\text{aq})$.
 - C. $\text{Cr}^{3+}(\text{aq})$ can oxidize both $\text{Cr}^{2+}(\text{aq})$ and $\text{Cr}(\text{s})$.
 - D. $\text{Cr}^{3+}(\text{aq})$ can oxidize $\text{Cr}(\text{s})$ and reduce $\text{Cr}^{2+}(\text{aq})$.
31. Which factors affect the amount, in mol, of product formed during electrolysis?
- I. The charge on the ion
 - II. The molar mass of the ion
 - III. The duration of the electrolysis
- A. I and II only
 - B. I and III only
 - C. II and III only
 - D. I, II and III
32. Which are isomers of C_5H_{12} ?



- A. I and II only
- B. I and III only
- C. II and III only
- D. I, II and III

33. Which compound has a chiral carbon?
- Bromoethane
 - 2-bromopropane
 - 2-bromobutane
 - 3-bromopentane
34. Which conditions best favour oxidation of primary alcohols directly to carboxylic acids?
- Excess acidified potassium dichromate (VI) and distillation
 - Excess acidified potassium dichromate (VI) and reflux
 - Few drops of acidified potassium dichromate (VI) and distillation
 - Few drops of acidified potassium dichromate (VI) and reflux
35. Which statement best describes retrosynthesis?
- The reaction conditions needed to convert the product of a reaction back to the starting materials.
 - Synthesizing a target molecule by working back from the target molecule to the starting materials.
 - A synthetic scheme using traditional methods rather than modern methods and materials.
 - A synthetic pathway which favours the equilibrium towards the products.
36. What combination of reactants will convert nitrobenzene to phenylamine in two steps?



	Initial reactant(s)	Second reactant
A.	Concentrated HCl and Sn (s)	OH ⁻ (aq)
B.	Concentrated HCl and Sn (s)	NH ₄ ⁺ (aq)
C.	Acidified potassium dichromate (VI)	OH ⁻ (aq)
D.	Acidified potassium dichromate (VI)	NH ₄ ⁺ (aq)

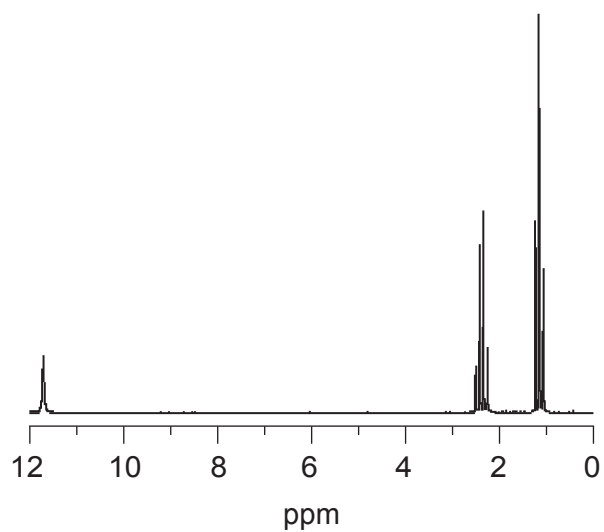
37. A well tested scientific idea which has been used to make predictions cannot explain a particular event. Which statement describes the scientific approach to this dilemma?
- A. Hypothesis should be discarded.
 - B. Hypothesis should be revised.
 - C. Theory should be discarded.
 - D. Theory should be revised.

38. What information about 2-hydroxybutanoic acid can be inferred through mass spectrometry, MS, infrared spectroscopy, IR, and proton nuclear magnetic resonance spectroscopy, $^1\text{H NMR}$?

	MS	IR	$^1\text{H NMR}$
A.	$M = 104 \text{ g mol}^{-1}$.	Compound contains carboxyl and hydroxyl groups.	The hydroxyl group is on the 2nd, rather than 4th carbon.
B.	$M = 104 \text{ g mol}^{-1}$.	The hydroxyl group is on the 2nd, rather than 4th carbon.	Compound contains carboxyl and hydroxyl groups.
C.	Compound contains carboxyl and hydroxyl groups.	$M = 104 \text{ g mol}^{-1}$.	The hydroxyl group is on the 2nd, rather than 4th carbon.
D.	Compound contains carboxyl and hydroxyl groups.	The hydroxyl group is on the 2nd, rather than 4th carbon.	$M = 104 \text{ g mol}^{-1}$.

39. What information can be deduced about a compound through X-ray crystallography?
- A. Boiling and melting points
 - B. Bond angles
 - C. Bonds that will break during fragmentation
 - D. Ionization energy

40. Which organic compound has the ^1H NMR shown?



- A. Methanal
 - B. Ethanoic acid
 - C. Methyl ethanoate
 - D. Propanoic acid
-

Disclaimer:

Content used in IB assessments is taken from authentic, third-party sources. The views expressed within them belong to their individual authors and/or publishers and do not necessarily reflect the views of the IB.

References:

40. Spectral Database for Organic Compounds, SDBS, n.d. [online] Available at: https://sdb.sdb.aist.go.jp/sdb/cgi-bin/direct_frame_top.cgi [Accessed 6 October 2021].

All other texts, graphics and illustrations © International Baccalaureate Organization 2022